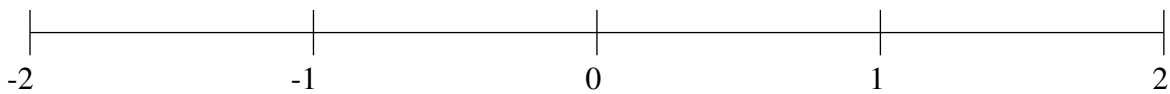


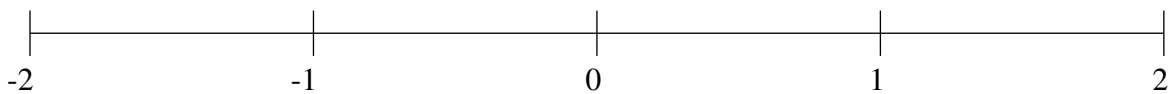
Classification de Fractions (H)

À l'aide des droites numériques, classifiez chaque série de fractions ci-dessous en ordre croissant.

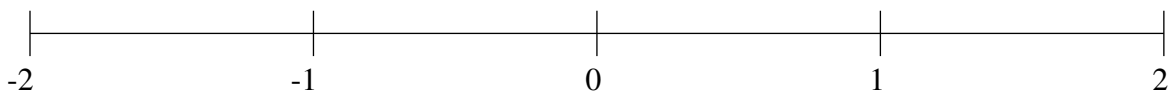
$$-1\frac{1}{4}, \frac{5}{6}, -\frac{1}{2}, 1\frac{1}{2}, -\frac{1}{12}$$



$$1\frac{3}{4}, 1\frac{1}{4}, \frac{3}{4}, -\frac{3}{4}, -\frac{1}{3}$$



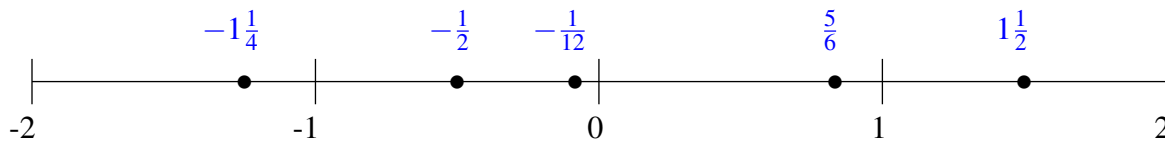
$$-1\frac{5}{6}, 1\frac{1}{3}, 1\frac{3}{4}, -1\frac{1}{2}, \frac{1}{2}$$



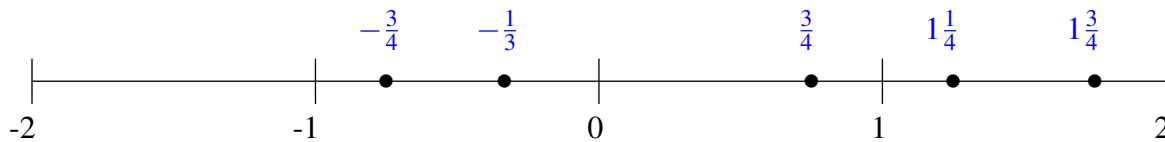
Classification de Fractions (H) Solutions

À l'aide des droites numériques, classifiez chaque série de fractions ci-dessous en ordre croissant.

$$-1\frac{1}{4}, \frac{5}{6}, -\frac{1}{2}, 1\frac{1}{2}, -\frac{1}{12}$$



$$1\frac{3}{4}, 1\frac{1}{4}, \frac{3}{4}, -\frac{3}{4}, -\frac{1}{3}$$



$$-1\frac{5}{6}, 1\frac{1}{3}, 1\frac{3}{4}, -1\frac{1}{2}, \frac{1}{2}$$

