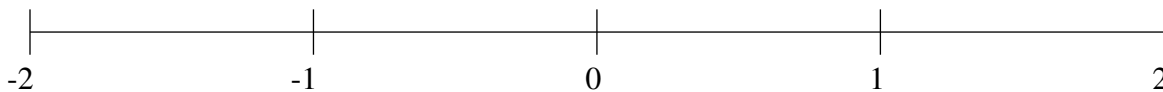


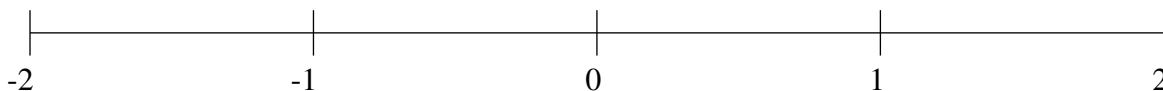
Classification de Fractions (C)

À l'aide des droites numériques, classifiez chaque série de fractions ci-dessous en ordre croissant.

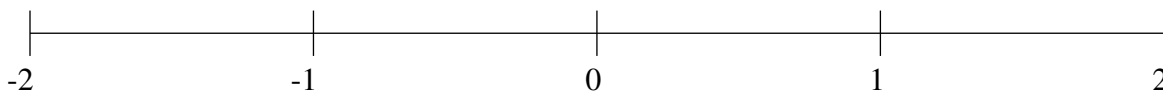
$$1\frac{1}{3}, -\frac{1}{4}, -1\frac{1}{6}, \frac{1}{2}, -1\frac{1}{2}$$



$$-\frac{2}{3}, -\frac{1}{4}, 1\frac{7}{24}, -1\frac{3}{4}, -1\frac{1}{3}$$



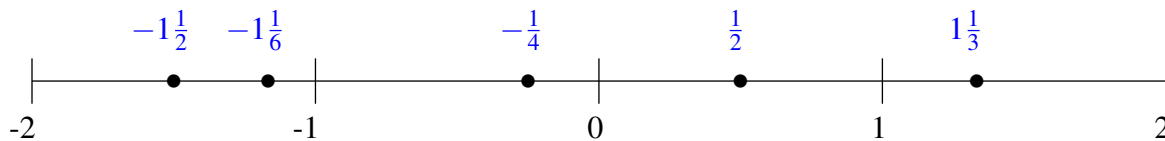
$$\frac{5}{6}, -1\frac{2}{3}, 1\frac{1}{2}, -\frac{1}{4}, -\frac{5}{6}$$



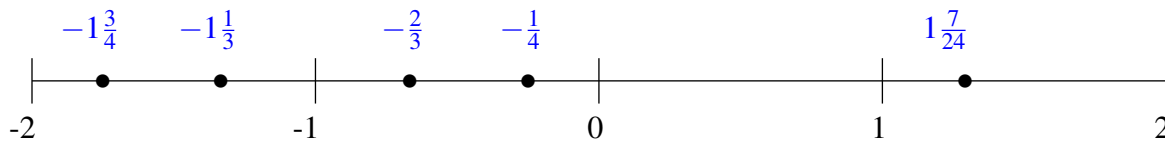
Classification de Fractions (C) Solutions

À l'aide des droites numériques, classifiez chaque série de fractions ci-dessous en ordre croissant.

$$1\frac{1}{3}, -\frac{1}{4}, -1\frac{1}{6}, \frac{1}{2}, -1\frac{1}{2}$$



$$-\frac{2}{3}, -\frac{1}{4}, 1\frac{7}{24}, -1\frac{3}{4}, -1\frac{1}{3}$$



$$\frac{5}{6}, -1\frac{2}{3}, 1\frac{1}{2}, -\frac{1}{4}, -\frac{5}{6}$$

