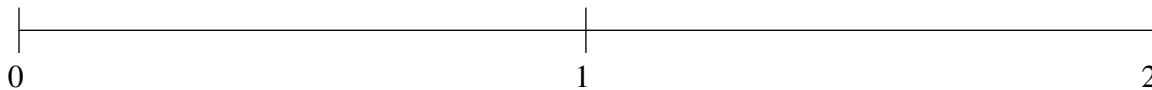


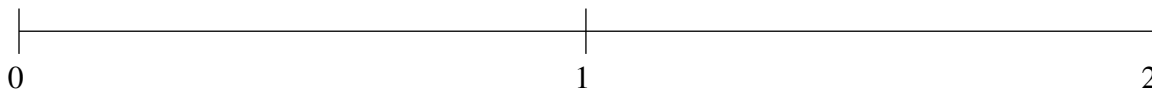
Classification de Fractions (A)

À l'aide des droites numériques, classifiez chaque série de fractions ci-dessous en ordre croissant.

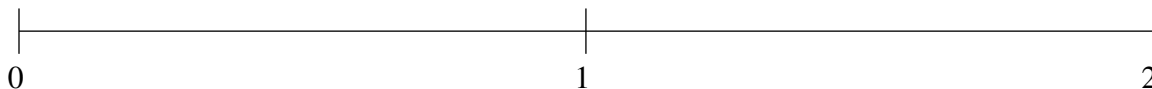
$$1\frac{1}{5}, 1\frac{1}{2}, \frac{8}{9}, 1\frac{4}{5}, \frac{1}{4}$$



$$1\frac{4}{5}, 1\frac{1}{2}, \frac{3}{4}, 1\frac{1}{6}, \frac{1}{3}$$



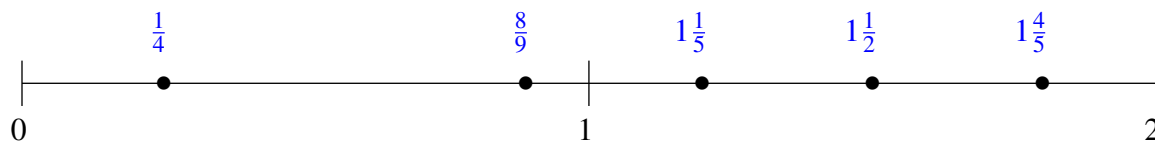
$$1\frac{1}{2}, 1\frac{1}{5}, \frac{4}{5}, \frac{1}{5}, \frac{1}{2}$$



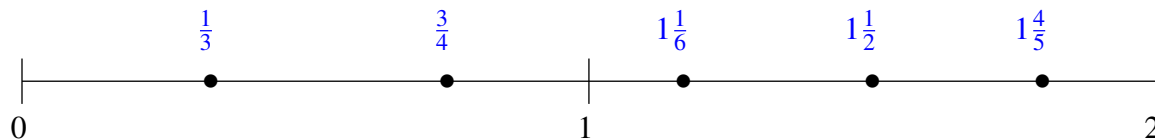
Classification de Fractions (A) Solutions

À l'aide des droites numériques, classifiez chaque série de fractions ci-dessous en ordre croissant.

$$1\frac{1}{5}, 1\frac{1}{2}, \frac{8}{9}, 1\frac{4}{5}, \frac{1}{4}$$



$$1\frac{4}{5}, 1\frac{1}{2}, \frac{3}{4}, 1\frac{1}{6}, \frac{1}{3}$$



$$1\frac{1}{2}, 1\frac{1}{5}, \frac{4}{5}, \frac{1}{5}, \frac{1}{2}$$

