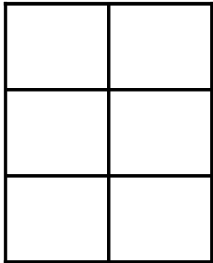
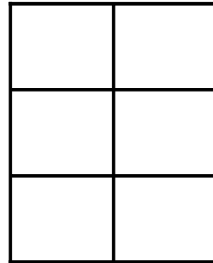


Modèles de Sixièmes (A)

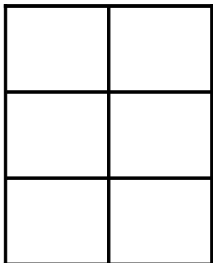
Instructions: Représentez chaque fractions en colorant les sections appropriées du modèle correspondant. Essayez de représenter les mêmes fractions de façons différentes.



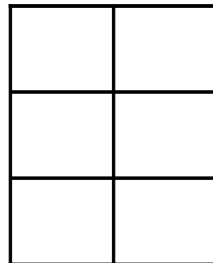
$$\frac{2}{6}$$



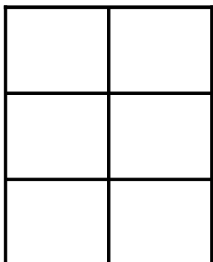
$$\frac{3}{6}$$



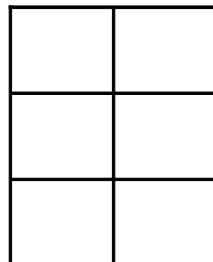
$$\frac{2}{6}$$



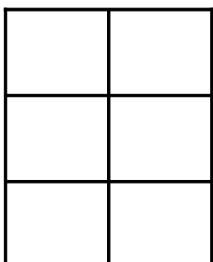
$$\frac{3}{6}$$



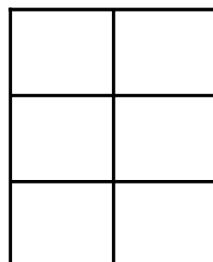
$$\frac{2}{6}$$



$$\frac{3}{6}$$



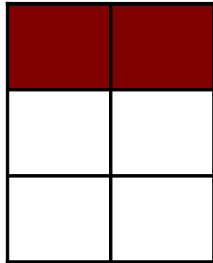
$$\frac{6}{6}$$



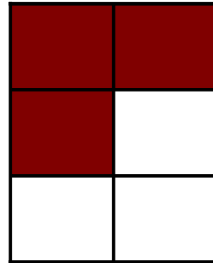
$$\frac{6}{6}$$

Modèles de Sixièmes (A) Solutions

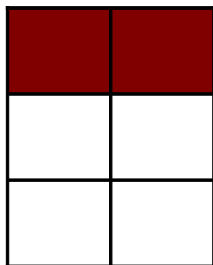
Instructions: Représentez chaque fractions en colorant les sections appropriées du modèle correspondant. Essayez de représenter les mêmes fractions de façons différentes.



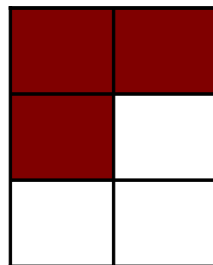
$$\frac{2}{6}$$



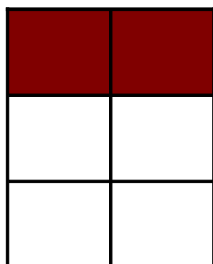
$$\frac{3}{6}$$



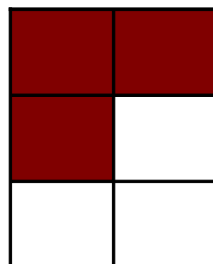
$$\frac{2}{6}$$




$$\frac{3}{6}$$




$$\frac{2}{6}$$



$$\frac{3}{6}$$



$$\frac{6}{6}$$



$$\frac{6}{6}$$