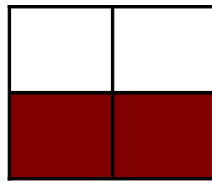


Modèles de Quarts (E)

Instructions: Inscrivez le bon numérateur.



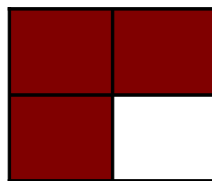
$$\frac{2}{4}$$




$$\frac{4}{4}$$




$$\frac{4}{4}$$



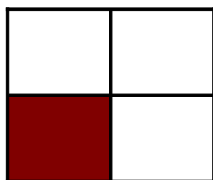
$$\frac{4}{4}$$



$$\frac{4}{4}$$



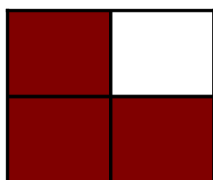
$$\frac{4}{4}$$




$$\frac{4}{4}$$



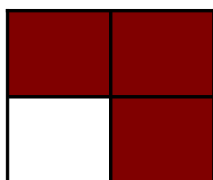
$$\frac{4}{4}$$



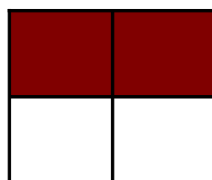
$$\frac{4}{4}$$



$$\frac{4}{4}$$



$$\frac{4}{4}$$



$$\frac{4}{4}$$