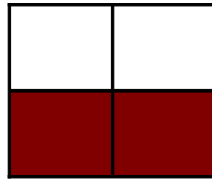


Modèles de Quarts (E)

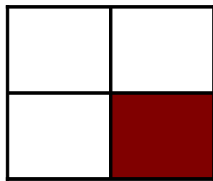
Instructions: Inscrivez le bon numérateur.



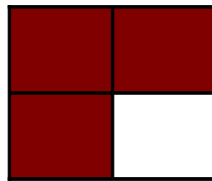
$$\frac{2}{4}$$




$$\frac{\quad}{4}$$




$$\frac{\quad}{4}$$



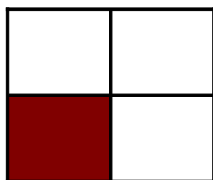
$$\frac{\quad}{4}$$



$$\frac{\quad}{4}$$



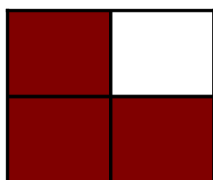
$$\frac{\quad}{4}$$




$$\frac{\quad}{4}$$



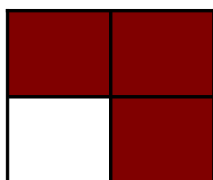
$$\frac{\quad}{4}$$



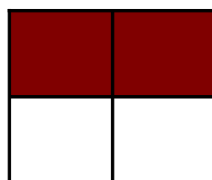
$$\frac{\quad}{4}$$



$$\frac{\quad}{4}$$




$$\frac{\quad}{4}$$



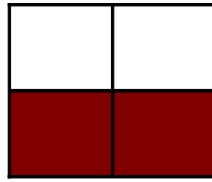
$$\frac{\quad}{4}$$

Modèles de Quarts (E) Solutions

Instructions: Inscrivez le bon numérateur.



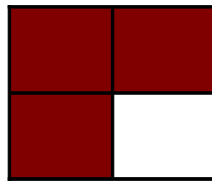
$$\frac{2}{4}$$




$$\frac{2}{4}$$




$$\frac{1}{4}$$




$$\frac{3}{4}$$



$$\frac{3}{4}$$




$$\frac{2}{4}$$




$$\frac{1}{4}$$



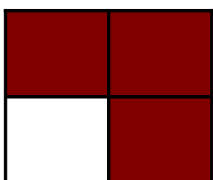
$$\frac{3}{4}$$



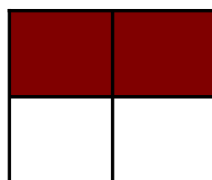
$$\frac{3}{4}$$



$$\frac{2}{4}$$



$$\frac{3}{4}$$



$$\frac{2}{4}$$