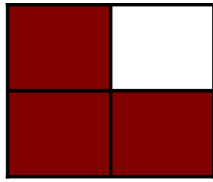
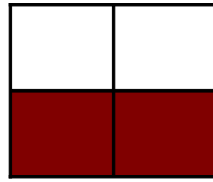


Modèles de Quarts (D)


Instructions: Inscrivez le bon numérateur.



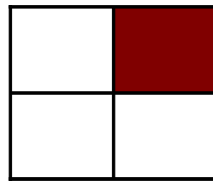
$$\frac{3}{4}$$



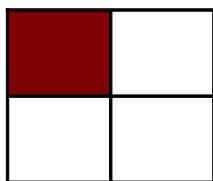
$$\frac{\quad}{4}$$



$$\frac{\quad}{4}$$



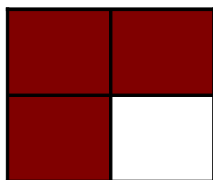
$$\frac{\quad}{4}$$




$$\frac{\quad}{4}$$



$$\frac{\quad}{4}$$



$$\frac{\quad}{4}$$




$$\frac{\quad}{4}$$



$$\frac{\quad}{4}$$



$$\frac{\quad}{4}$$



$$\frac{\quad}{4}$$



$$\frac{\quad}{4}$$