



Modèles de Cinquièmes (E)

Instructions: Inscrivez le numérateur correspondant.




$$\frac{2}{5}$$



$$\frac{\quad}{5}$$




$$\frac{\quad}{5}$$




$$\frac{\quad}{5}$$




$$\frac{\quad}{5}$$




$$\frac{\quad}{5}$$



$$\frac{\quad}{5}$$



$$\frac{\quad}{5}$$



$$\frac{\quad}{5}$$