



Modèles de Cinquièmes (E)

Instructions: Inscrivez le numérateur correspondant.




$$\frac{2}{5}$$




$$\frac{\quad}{5}$$




$$\frac{\quad}{5}$$




$$\frac{\quad}{5}$$




$$\frac{\quad}{5}$$




$$\frac{\quad}{5}$$



$$\frac{\quad}{5}$$




$$\frac{\quad}{5}$$




$$\frac{\quad}{5}$$

Modèles de Cinquièmes (E) Solutions

Instructions: Inscrivez le numérateur correspondant.




$$\frac{2}{5}$$



$$\frac{2}{5}$$




$$\frac{3}{5}$$




$$\frac{3}{5}$$




$$\frac{1}{5}$$




$$\frac{1}{5}$$



$$\frac{5}{5}$$



$$\frac{2}{5}$$



$$\frac{2}{5}$$