

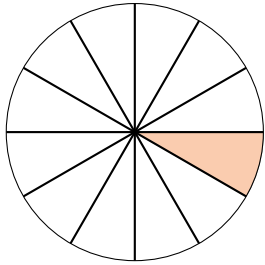
# Fractions Équivalentes (F)

Nom: \_\_\_\_\_

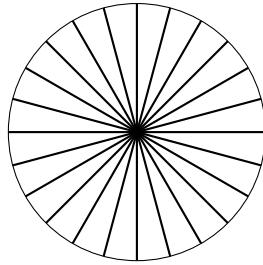
Date: \_\_\_\_\_

Colorez le deuxième modèle de la même façon que le premier ensuite déterminez les fractions équivalentes.

1.

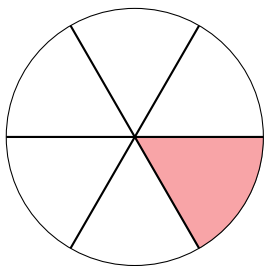


=

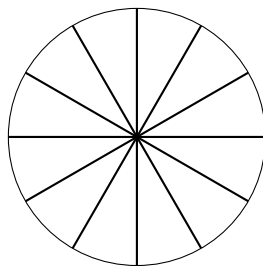


— = —

2.

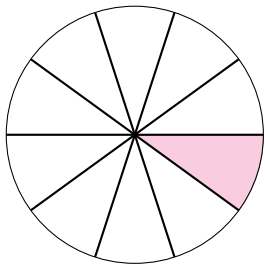


=

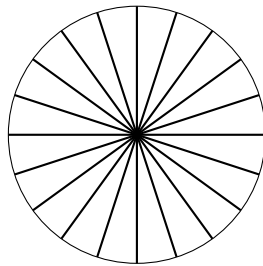


— = —

3.

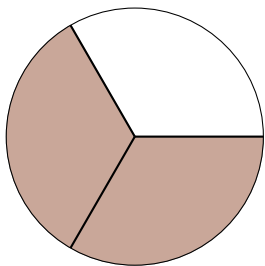


=

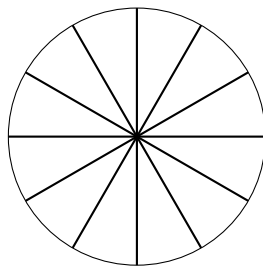


— = —

4.

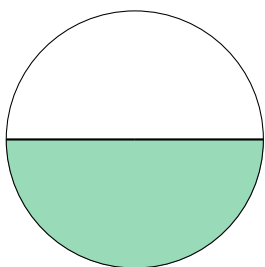


=

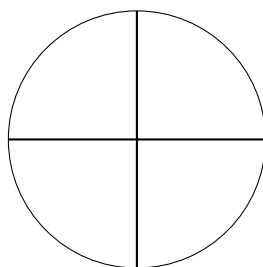


— = —

5.



=



— = —