


Coloriage des Fractions (I)

Colorez chaque groupe de figures pour représenter chaque fraction.


1.

$$\frac{1}{3}$$




2.

$$\frac{3}{4}$$



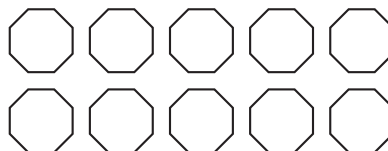
3.

$$\frac{1}{4}$$




4.

$$\frac{1}{2}$$




5.

$$\frac{1}{3}$$



6.


$$\frac{2}{3}$$




Coloriage des Fractions (I) Réponses

Colorez chaque groupe de figures pour représenter chaque fraction.


1.




2.




3.



4.



5.



6.

