

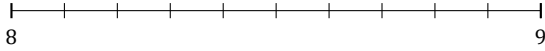
# L'Arrondi de Nombres Mixtes (I)

Nom: \_\_\_\_\_

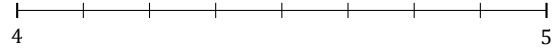
Date: \_\_\_\_\_

Arrondissez chaque nombre mixte au nombre entier le plus proche.  
Arrondissez à l'entier supérieur en cas d'égalité.

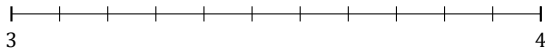
1.  $8\frac{7}{10} \approx$



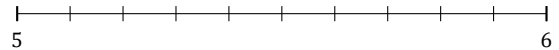
2.  $4\frac{1}{8} \approx$



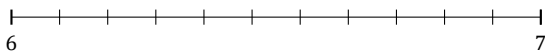
3.  $3\frac{9}{11} \approx$



4.  $5\frac{2}{10} \approx$




5.  $6\frac{10}{11} \approx$



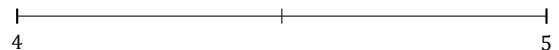
6.  $4\frac{5}{9} \approx$



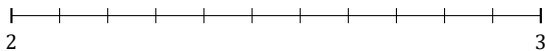
7.  $6\frac{2}{7} \approx$



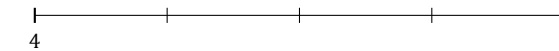
8.  $4\frac{1}{2} \approx$



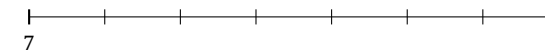
9.  $2\frac{8}{11} \approx$



10.  $4\frac{2}{4} \approx$



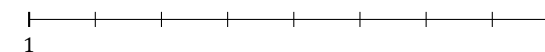
11.  $7\frac{3}{7} \approx$



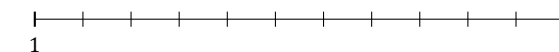
12.  $9\frac{2}{3} \approx$



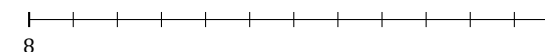
13.  $1\frac{5}{8} \approx$



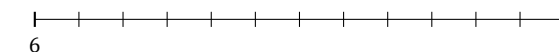
14.  $1\frac{3}{11} \approx$



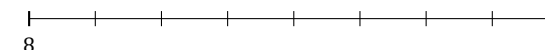
15.  $8\frac{5}{12} \approx$



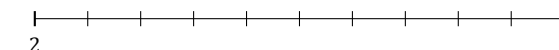
16.  $6\frac{9}{12} \approx$



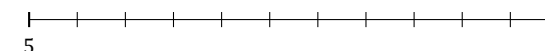
17.  $8\frac{4}{8} \approx$



18.  $2\frac{6}{10} \approx$



19.  $5\frac{4}{11} \approx$



20.  $4\frac{2}{5} \approx$

