

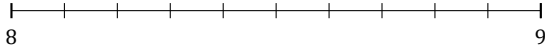
L'Arrondi de Nombres Mixtes (I)

Nom: _____

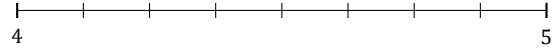
Date: _____

Arrondissez chaque nombre mixte au nombre entier le plus proche.
Arrondissez à l'entier supérieur en cas d'égalité.

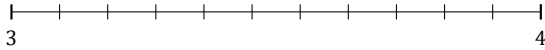
1. $8\frac{7}{10} \approx$



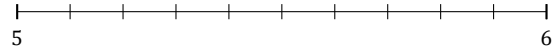
2. $4\frac{1}{8} \approx$



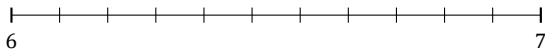
3. $3\frac{9}{11} \approx$



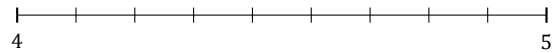
4. $5\frac{2}{10} \approx$




5. $6\frac{10}{11} \approx$



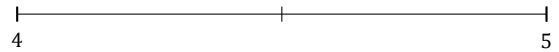
6. $4\frac{5}{9} \approx$



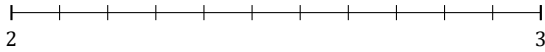
7. $6\frac{2}{7} \approx$



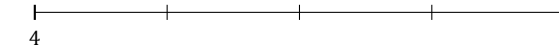
8. $4\frac{1}{2} \approx$



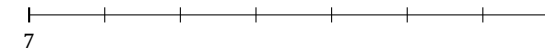
9. $2\frac{8}{11} \approx$



10. $4\frac{2}{4} \approx$



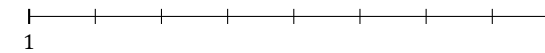
11. $7\frac{3}{7} \approx$



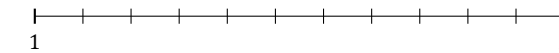
12. $9\frac{2}{3} \approx$



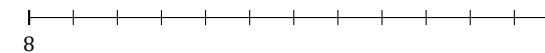
13. $1\frac{5}{8} \approx$



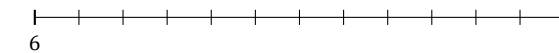
14. $1\frac{3}{11} \approx$



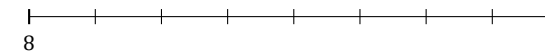
15. $8\frac{5}{12} \approx$



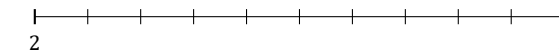
16. $6\frac{9}{12} \approx$



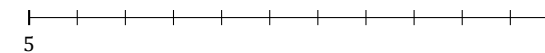
17. $8\frac{4}{8} \approx$




18. $2\frac{6}{10} \approx$



19. $5\frac{4}{11} \approx$



20. $4\frac{2}{5} \approx$



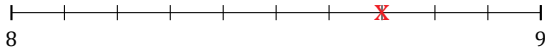
L'Arrondi de Nombres Mixtes (I) Réponses

Nom: _____

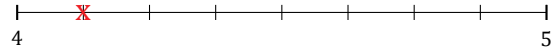
Date: _____

Arrondissez chaque nombre mixte au nombre entier le plus proche.
Arrondissez à l'entier supérieur en cas d'égalité.

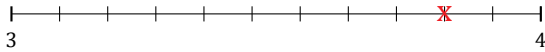
1. $8\frac{7}{10} \simeq 9$



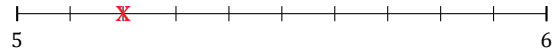
2. $4\frac{1}{8} \simeq 4$



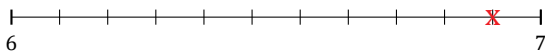
3. $3\frac{9}{11} \simeq 4$



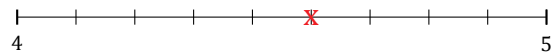
4. $5\frac{2}{10} \simeq 5$




5. $6\frac{10}{11} \simeq 7$




6. $4\frac{5}{9} \simeq 5$



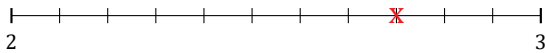
7. $6\frac{2}{7} \simeq 6$



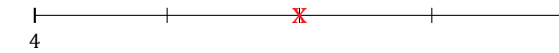
8. $4\frac{1}{2} \simeq 5$



9. $2\frac{8}{11} \simeq 3$




10. $4\frac{2}{4} \simeq 5$



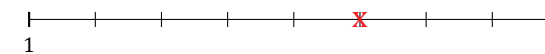
11. $7\frac{3}{7} \simeq 7$



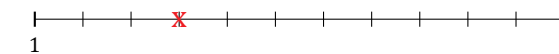
12. $9\frac{2}{3} \simeq 10$



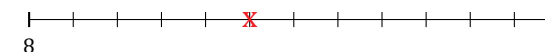
13. $1\frac{5}{8} \simeq 2$



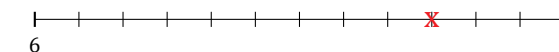
14. $1\frac{3}{11} \simeq 1$



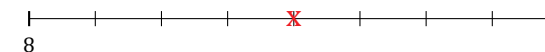
15. $8\frac{5}{12} \simeq 8$



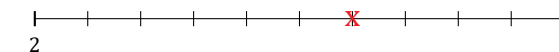
16. $6\frac{9}{12} \simeq 7$



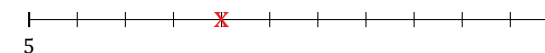
17. $8\frac{4}{8} \simeq 9$



18. $2\frac{6}{10} \simeq 3$



19. $5\frac{4}{11} \simeq 5$



20. $4\frac{2}{5} \simeq 4$

