

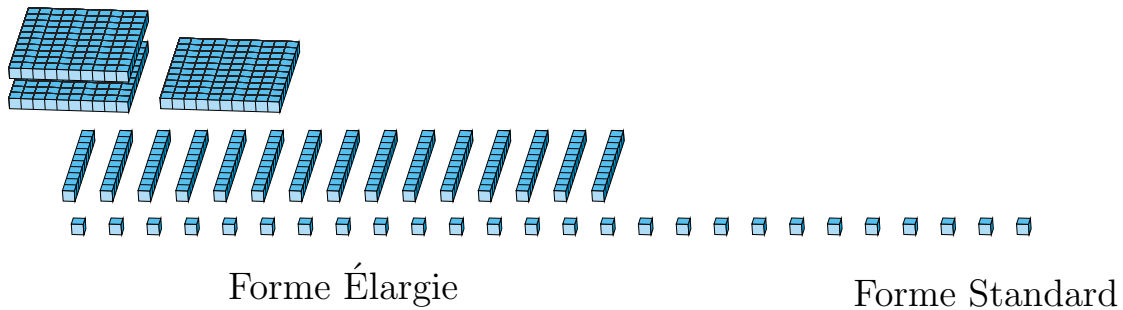
Regroupement en Blocs de Base Dix (B)

Nom: _____

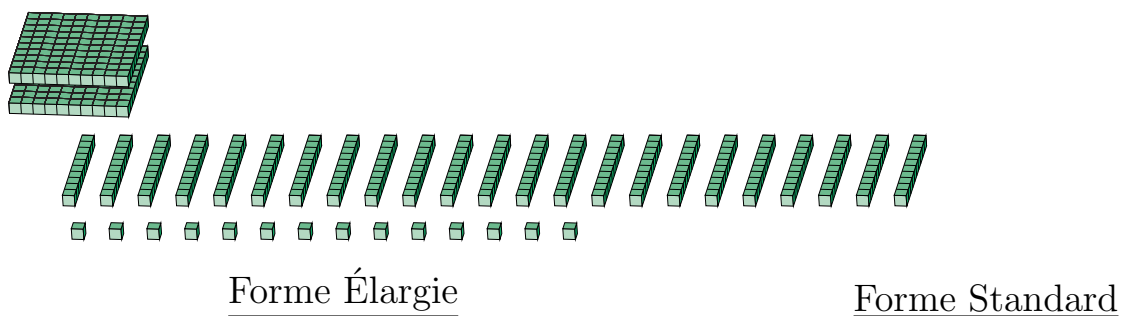
Date: _____

Quel est le nombre indiqué dans chaque bloc de base dix?

1.



2.



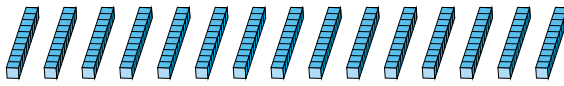
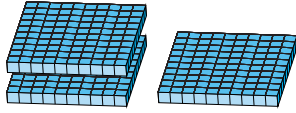
Regroupement en Blocs de Base Dix (B) Réponses

Nom: _____

Date: _____

Quel est le nombre indiqué dans chaque bloc de base dix?

1.



Forme Élargie

Forme Standard

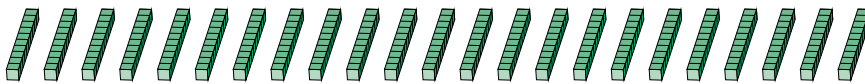
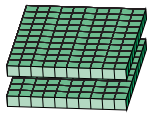
$$(3 \times 100) + (15 \times 10) + (26 \times 1)$$

$$(4 \times 100) + (7 \times 10) + (6 \times 1)$$

$$400 + 70 + 6$$

476

2.



Forme Élargie

Forme Standard

$$(2 \times 100) + (23 \times 10) + (14 \times 1)$$

$$(4 \times 100) + (4 \times 10) + (4 \times 1)$$

$$400 + 40 + 4$$

444