

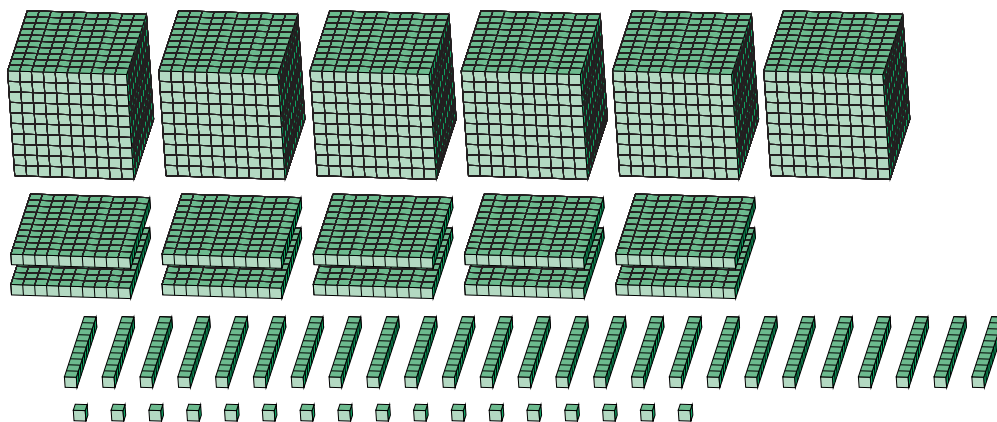
Regroupement en Blocs de Base Dix (A)

Nom: _____

Date: _____

Quel est le nombre indiqué dans chaque bloc de base dix?

1.



milliers



centaines



dizaines



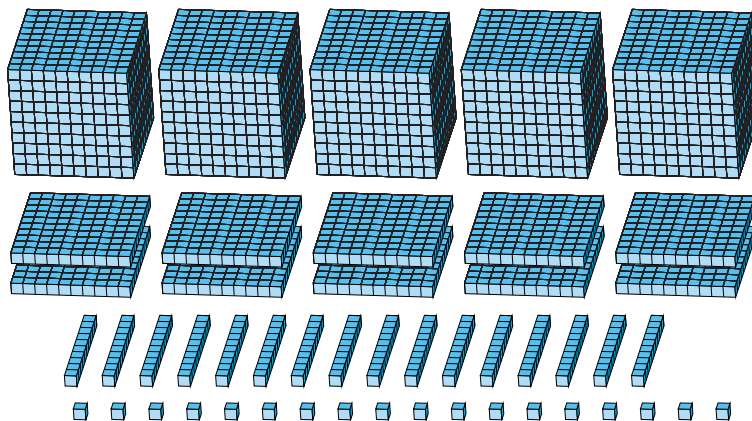
unités



regrouper



2.



milliers



centaines



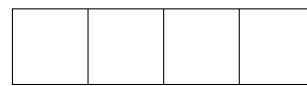
dizaines



unités



regrouper



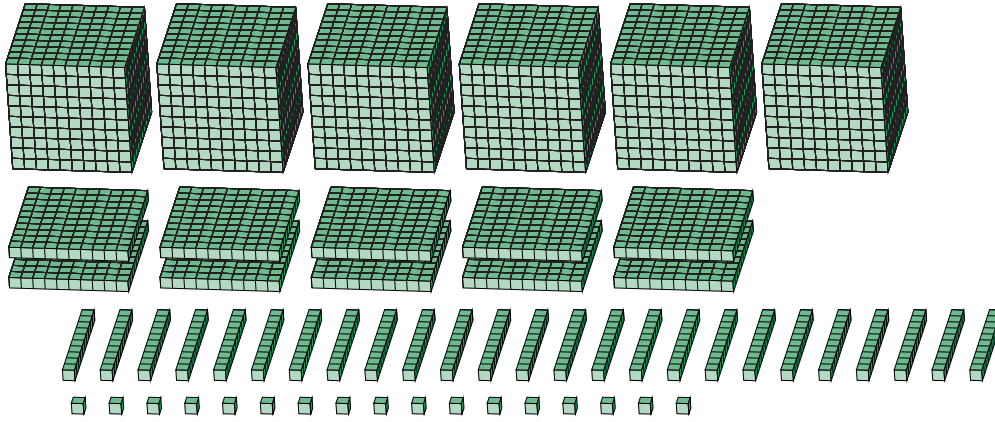
Regroupement en Blocs de Base Dix (A) Réponses

Nom: _____

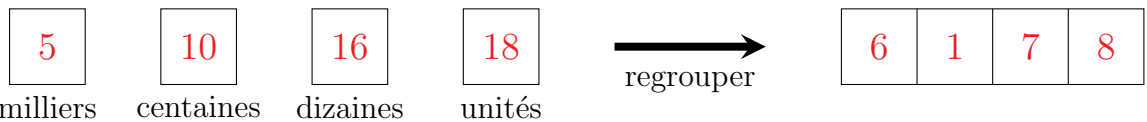
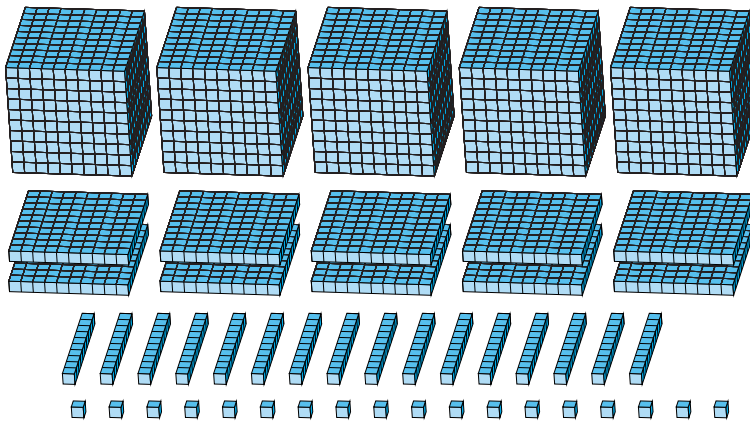
Date: _____

Quel est le nombre indiqué dans chaque bloc de base dix?

1.



2.



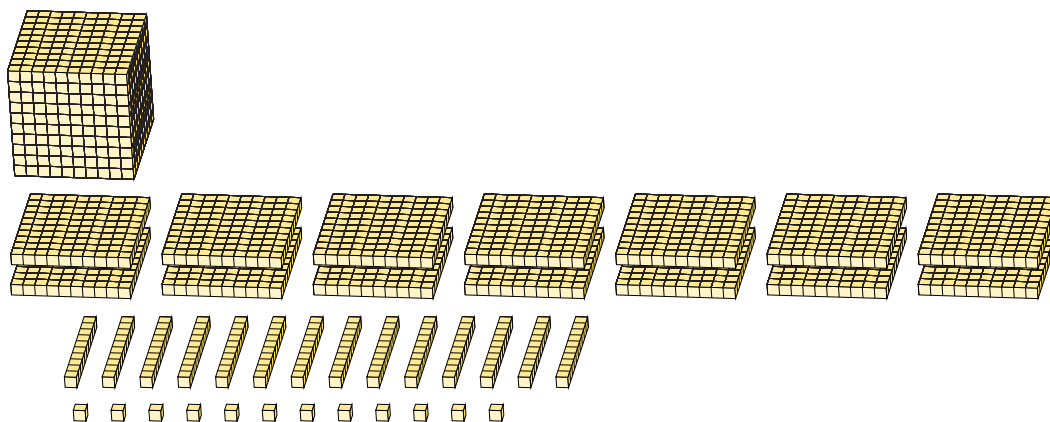
Regroupement en Blocs de Base Dix (B)

Nom: _____


Date: _____

Quel est le nombre indiqué dans chaque bloc de base dix?

1.



2.



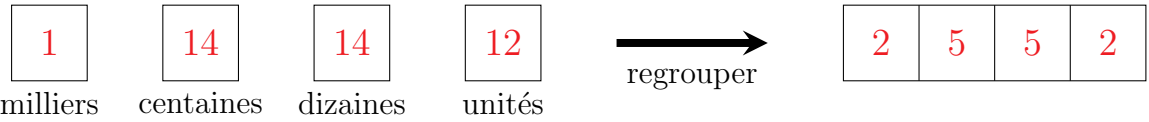
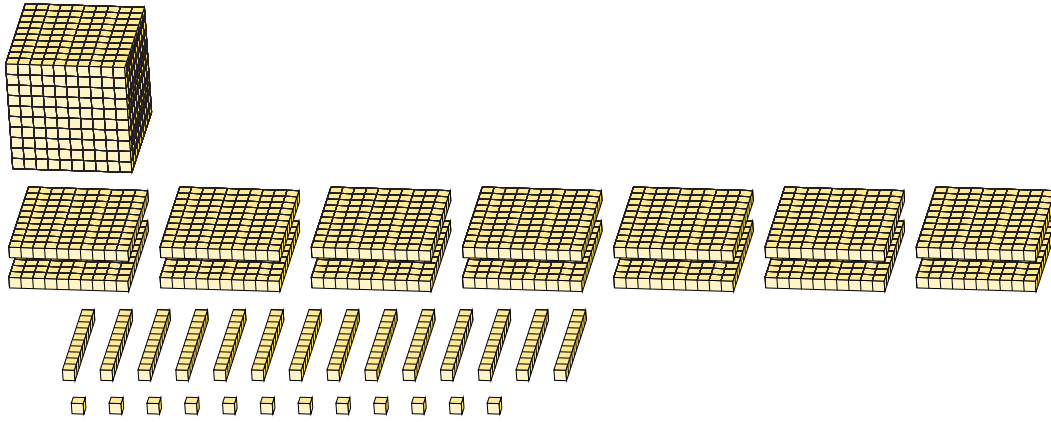
Regroupement en Blocs de Base Dix (B) Réponses

Nom: _____

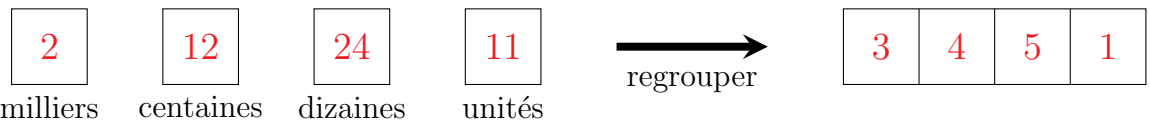

Date: _____

Quel est le nombre indiqué dans chaque bloc de base dix?

1.



2.



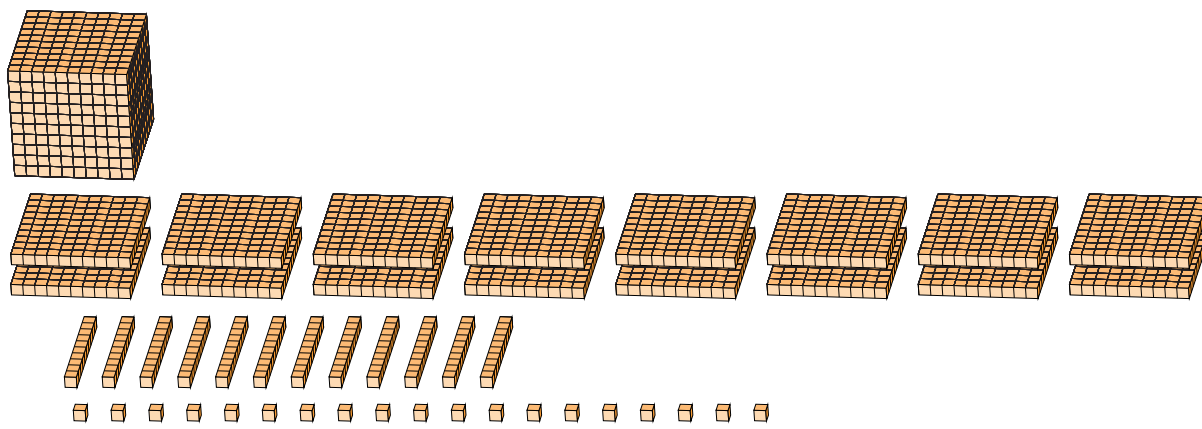
Regroupement en Blocs de Base Dix (C)

Nom: _____

Date: _____

Quel est le nombre indiqué dans chaque bloc de base dix?

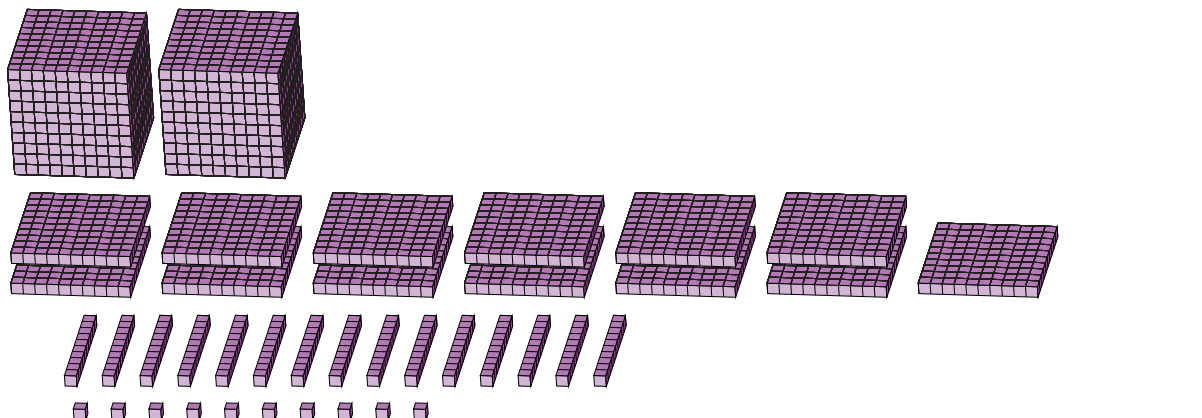
1.



A large cube representing 1000 units is shown at the top left. Below it, the same 1000 units are decomposed into 10 flats (each 100 units), 100 rods (each 10 units), and 1000 small cubes (each 1 unit).

□ □ □ □ → □ □ □ □
milliers centaines dizaines unités regrouper

2.



Two large cubes representing 2000 units are shown at the top left. Below them, the 2000 units are decomposed into 20 flats (each 100 units), 200 rods (each 10 units), and 2000 small cubes (each 1 unit).

□ □ □ □ → □ □ □ □
milliers centaines dizaines unités regrouper

Regroupement en Blocs de Base Dix (C) Réponses

Nom: _____

Date: _____

Quel est le nombre indiqué dans chaque bloc de base dix?

1.

1

1	16	12	19
---	----	----	----

milliers centaines dizaines unités

regrouper

2	7	3	9
---	---	---	---

Detailed description: The diagram shows a large cube representing 1,000 units. Below it are 16 flats representing 1,600 units. Below the flats are 12 rods representing 120 units. Below the rods are 19 individual units. An arrow labeled 'regrouper' points to a final representation: 2 thousands, 7 hundreds, 3 tens, and 9 units.

2.

2

2	13	15	10
---	----	----	----

milliers centaines dizaines unités

regrouper

3	4	6	0
---	---	---	---

Detailed description: The diagram shows 2 large cubes representing 2,000 units. Below them are 13 flats representing 1,300 units. Below the flats are 15 rods representing 150 units. Below the rods are 10 individual units. An arrow labeled 'regrouper' points to a final representation: 3 thousands, 4 hundreds, 6 tens, and 0 units.

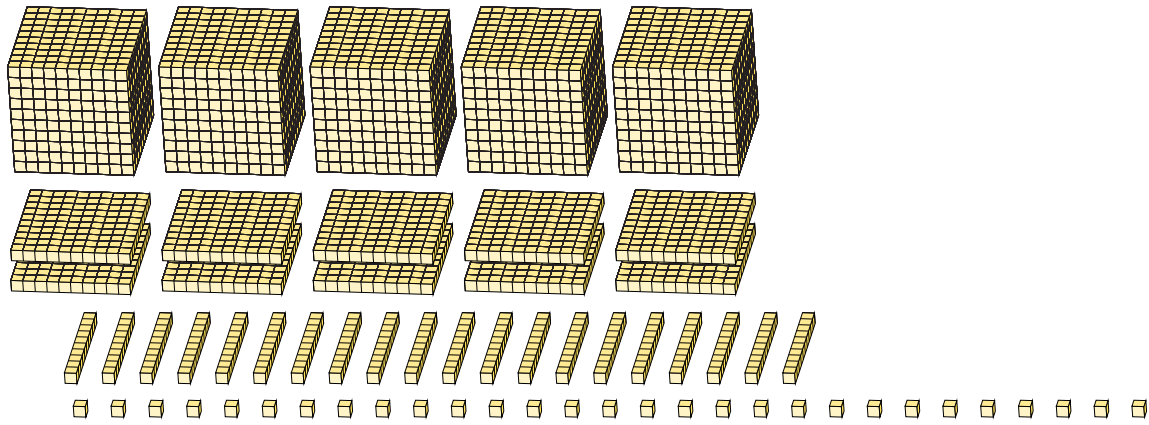
Regroupement en Blocs de Base Dix (D)

Nom: _____

Date: _____

Quel est le nombre indiqué dans chaque bloc de base dix?

1.



milliers



centaines




dizaines



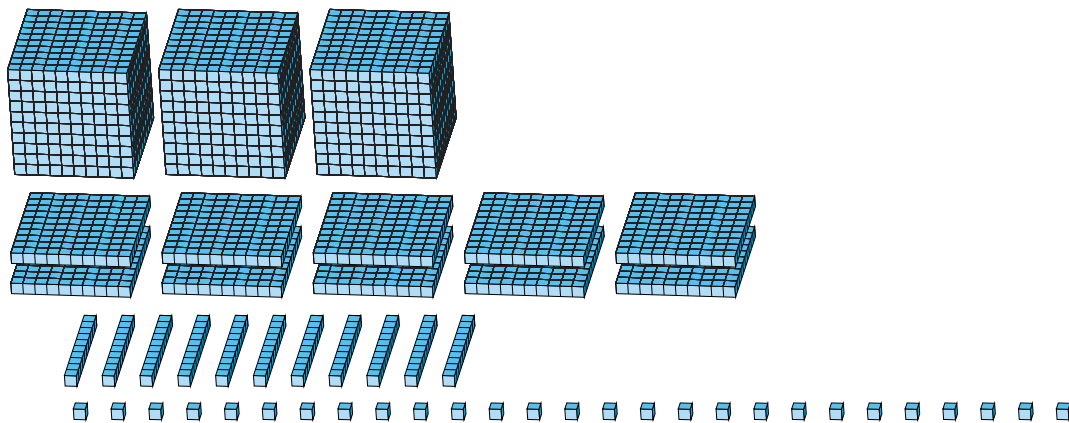
unités



regrouper



2.



milliers



centaines



dizaines



unités



regrouper



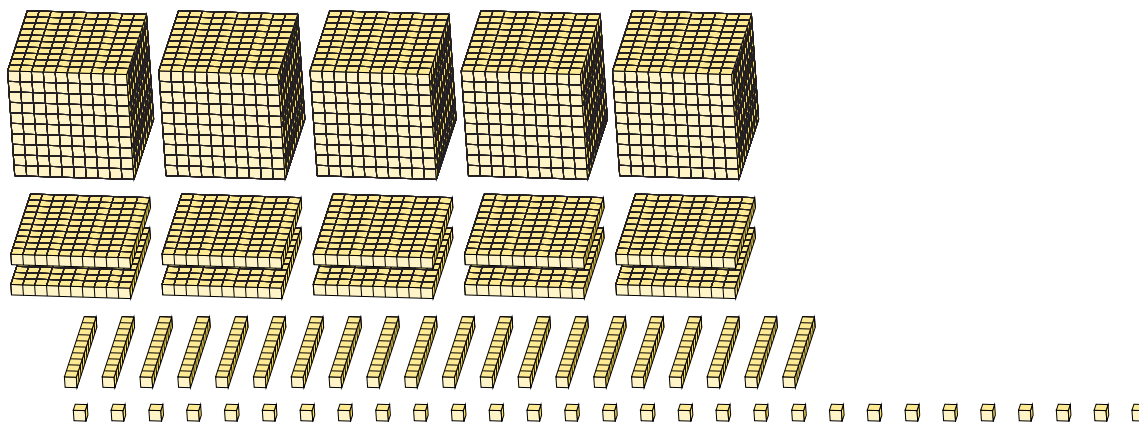
Regroupement en Blocs de Base Dix (D) Réponses

Nom: _____

Date: _____

Quel est le nombre indiqué dans chaque bloc de base dix?

1.



5

milliers

10

centaines

20

dizaines

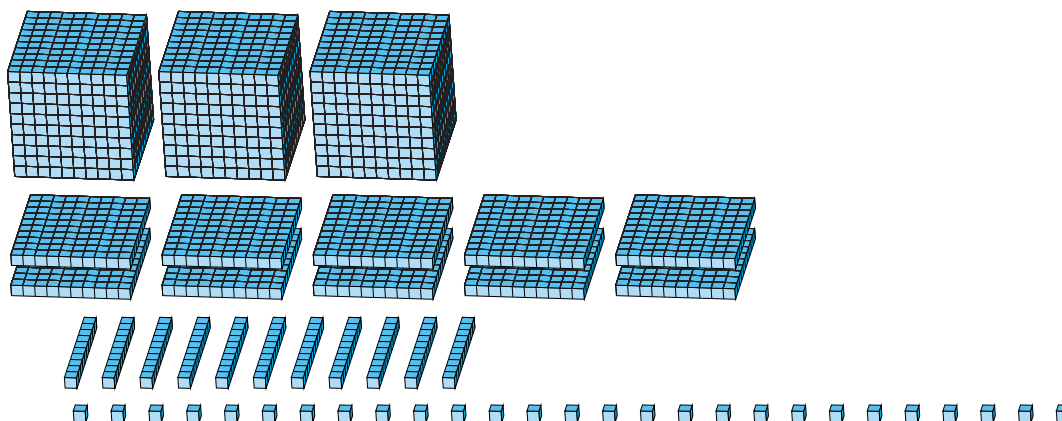
29

unités

regrouper

6 2 2 9

2.



3

milliers

10

centaines

11

dizaines

27

unités

regrouper

4 1 3 7

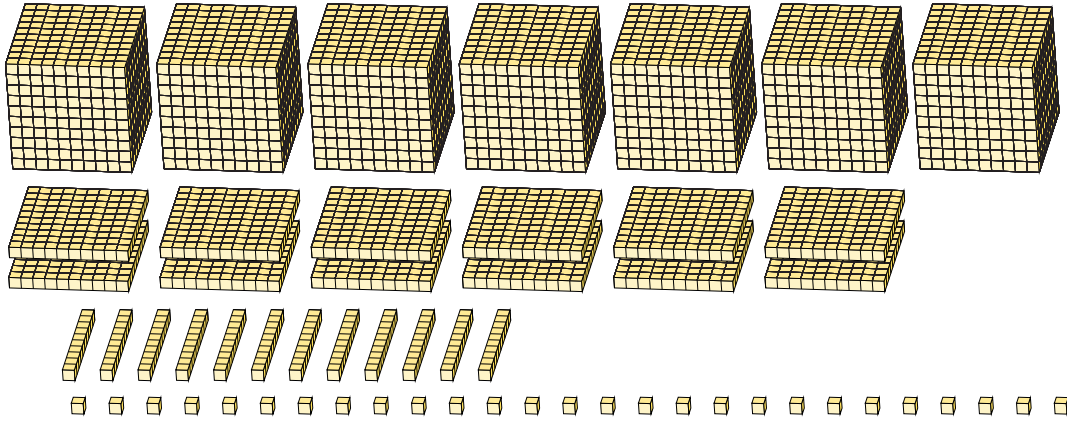
Regroupement en Blocs de Base Dix (E)

Nom: _____

Date: _____

Quel est le nombre indiqué dans chaque bloc de base dix?

1.



milliers




centaines



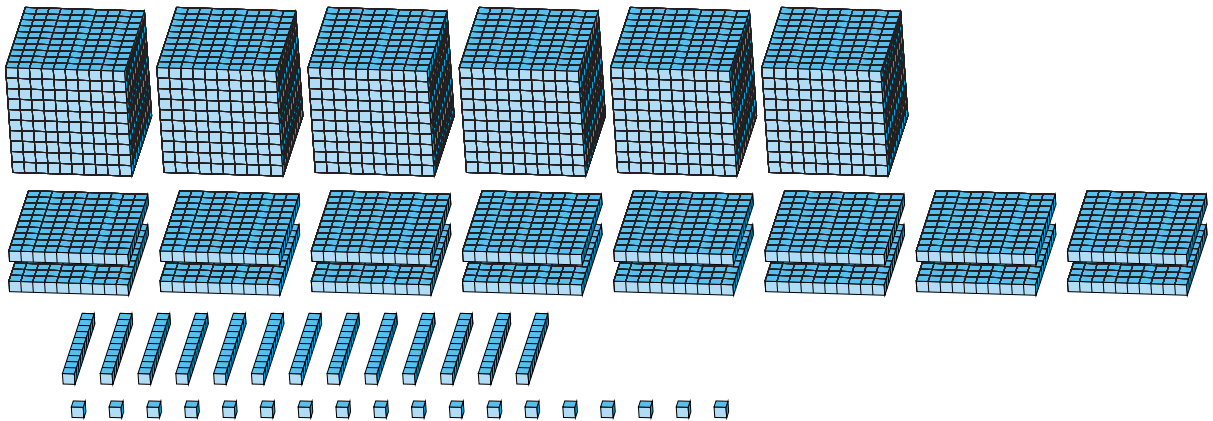
dizaines



unités



2.



milliers



centaines



dizaines



unités



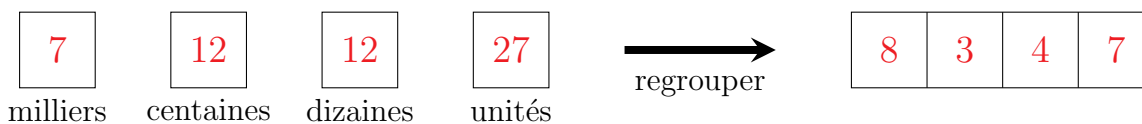
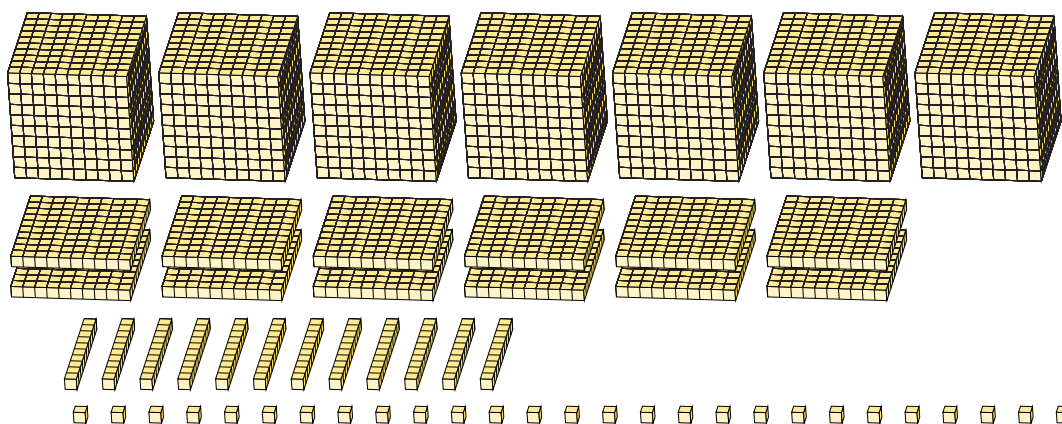
Regroupement en Blocs de Base Dix (E) Réponses

Nom: _____

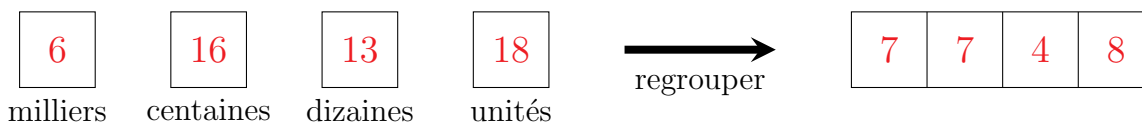
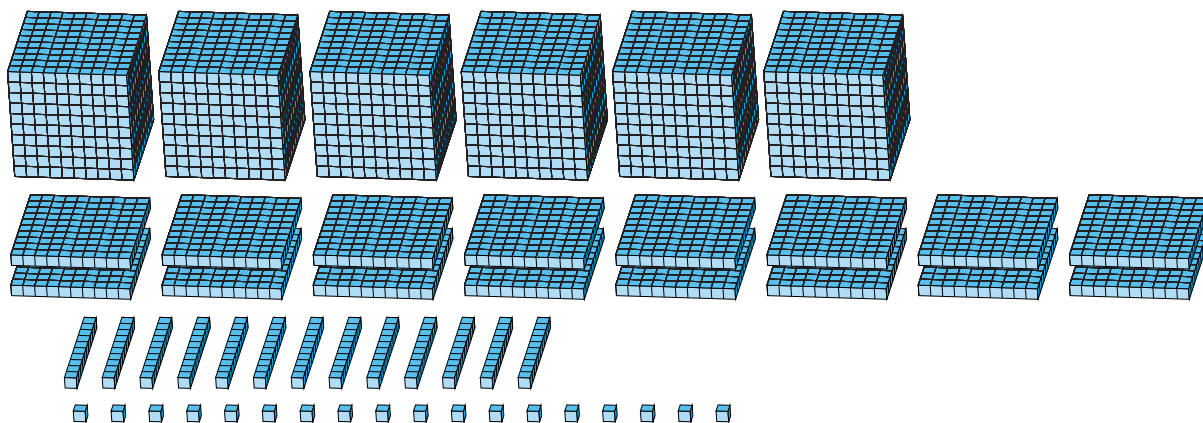
Date: _____

Quel est le nombre indiqué dans chaque bloc de base dix?

1.



2.



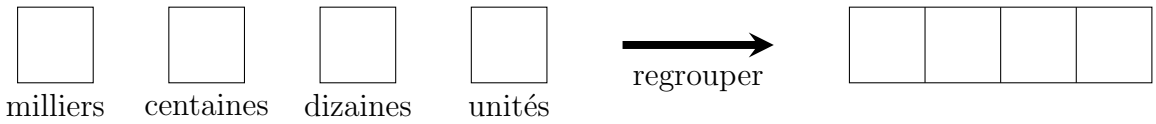
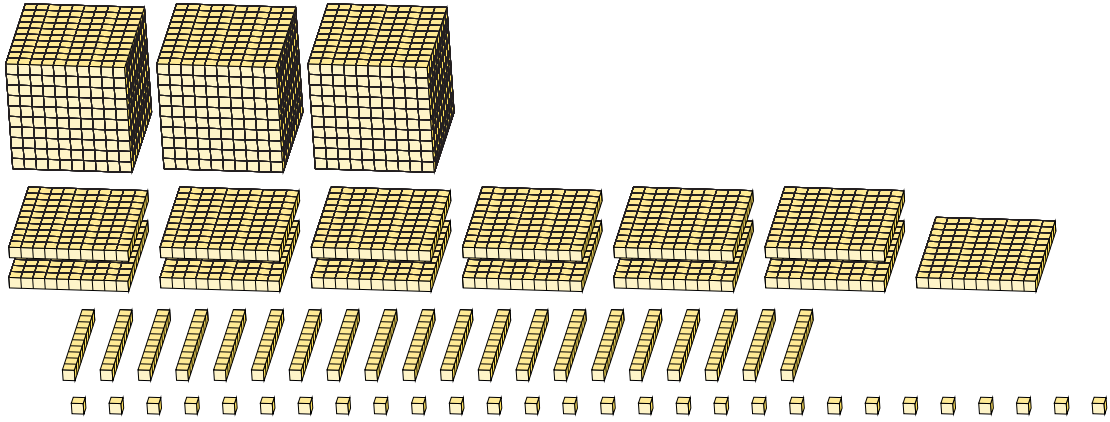
Regroupement en Blocs de Base Dix (F)

Nom: _____

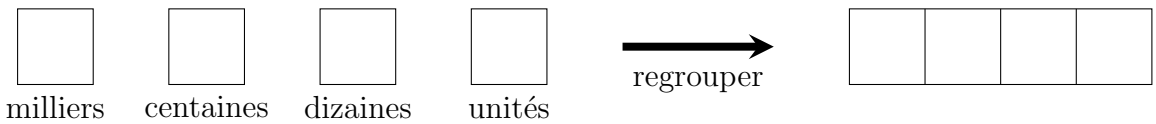
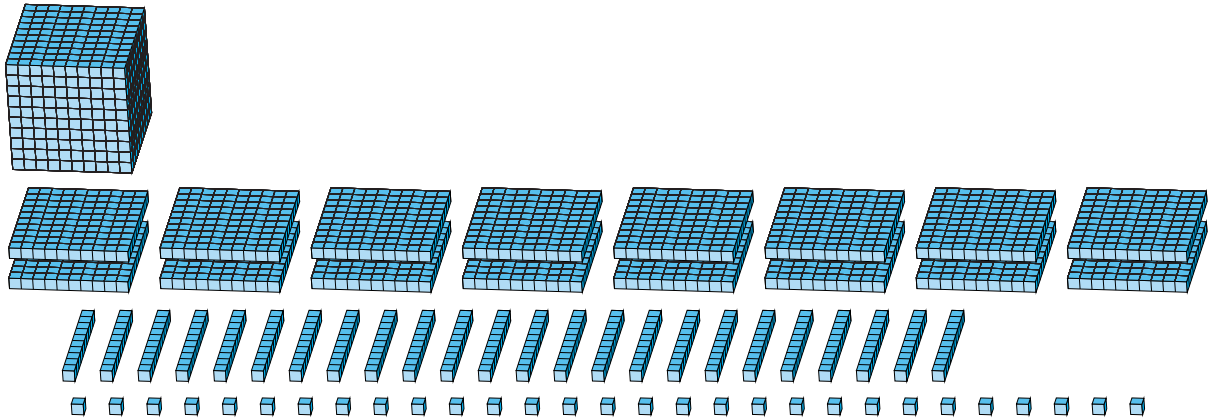
Date: _____

Quel est le nombre indiqué dans chaque bloc de base dix?

1.



2.



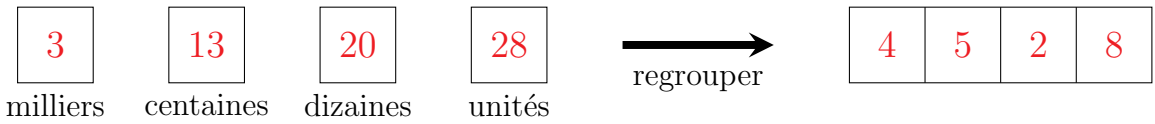
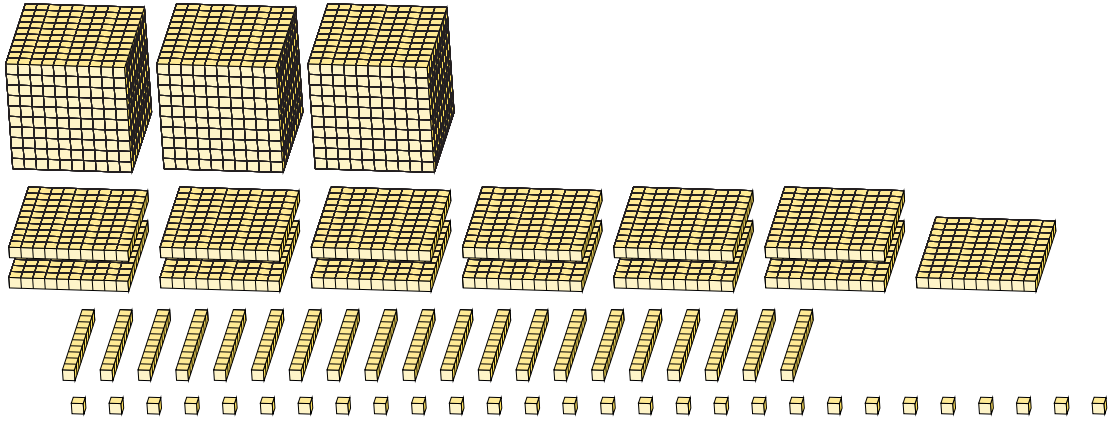
Regroupement en Blocs de Base Dix (F) Réponses

Nom: _____

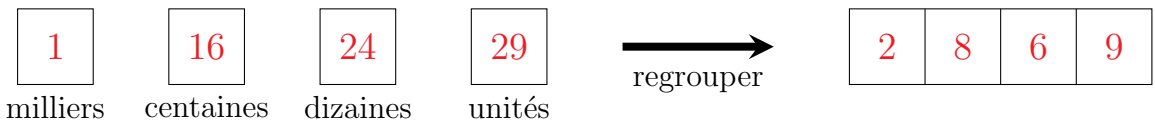
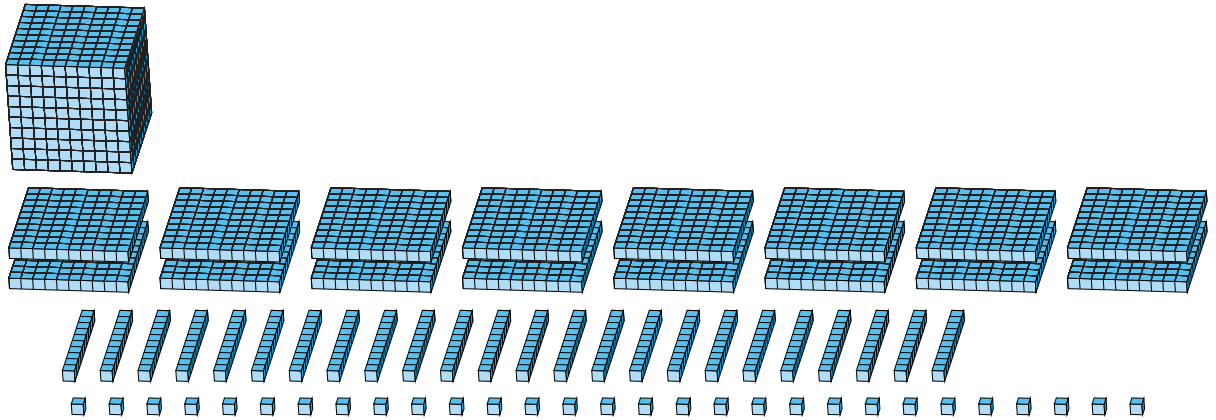
Date: _____

Quel est le nombre indiqué dans chaque bloc de base dix?

1.



2.



Regroupement en Blocs de Base Dix (G)

Nom: _____

Date: _____

Quel est le nombre indiqué dans chaque bloc de base dix?

1.

milliers centaines dizaines unités \longrightarrow regroupier

2.

milliers centaines dizaines unités \longrightarrow regroupier

Regroupement en Blocs de Base Dix (G) Réponses

Nom: _____

Date: _____

Quel est le nombre indiqué dans chaque bloc de base dix?

1.

2	15	21	20	→ regrouper	3	7	3	0
milliers	centaines	dizaines	unités					

2.

7	16	10	17	→ regrouper	8	7	1	7
milliers	centaines	dizaines	unités					

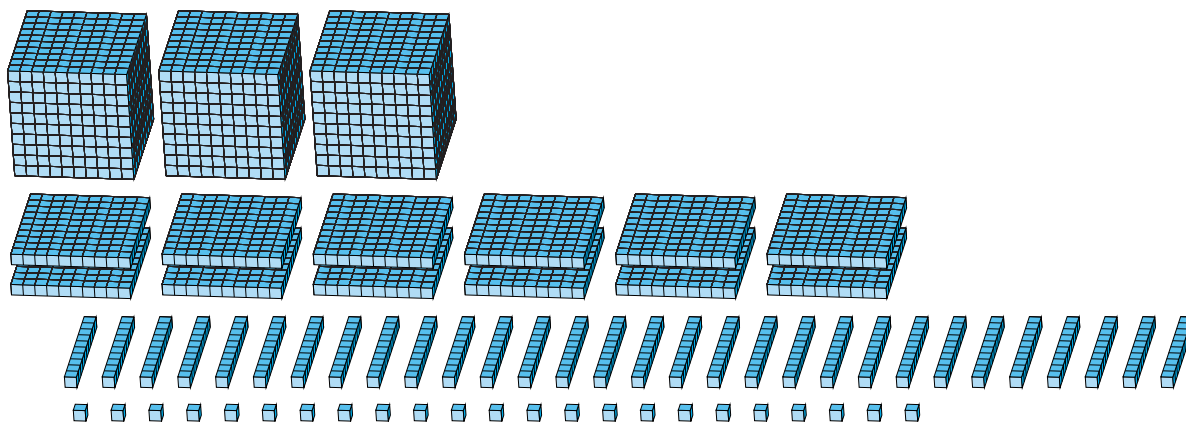
Regroupement en Blocs de Base Dix (H)

Nom: _____

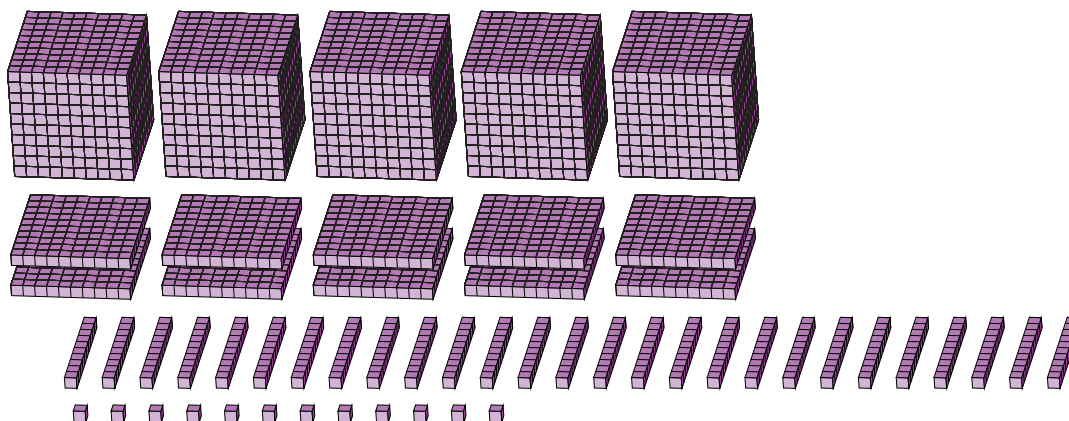
Date: _____

Quel est le nombre indiqué dans chaque bloc de base dix?

1.



2.



Regroupement en Blocs de Base Dix (H) Réponses

Nom: _____

Date: _____

Quel est le nombre indiqué dans chaque bloc de base dix?

1.

3 12 30 23

milliers centaines dizaines unités

regrouper

4	5	2	3
---	---	---	---

2.

5 10 27 12

milliers centaines dizaines unités

regrouper

6	2	8	2
---	---	---	---

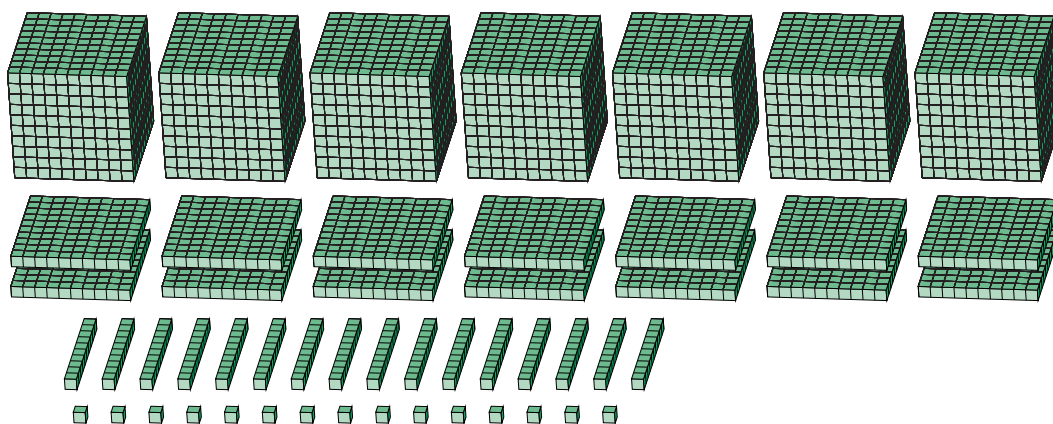
Regroupement en Blocs de Base Dix (I)

Nom: _____

Date: _____

Quel est le nombre indiqué dans chaque bloc de base dix?

1.



milliers



centaines



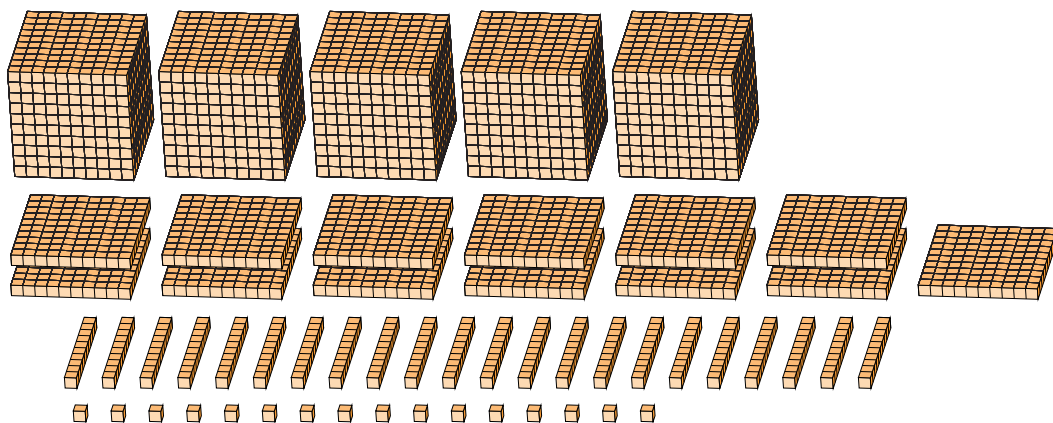
dizaines



unités



2.



milliers



centaines



dizaines



unités



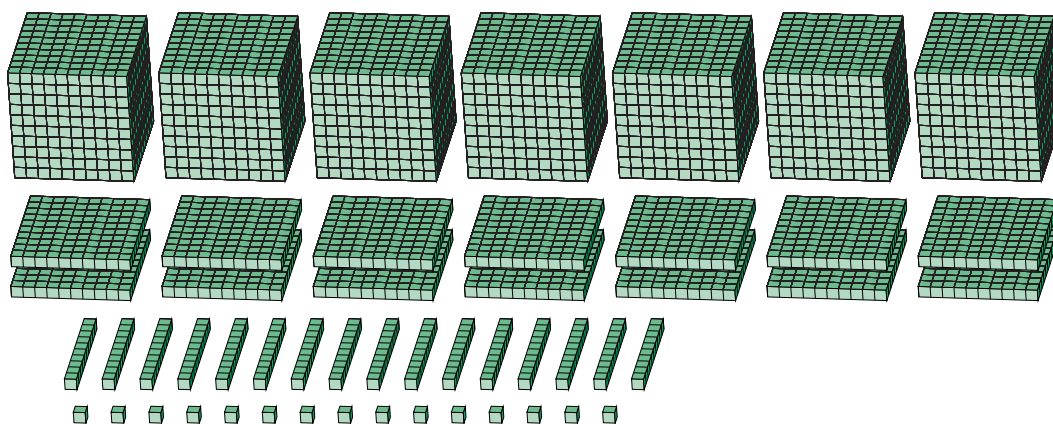
Regroupement en Blocs de Base Dix (I) Réponses

Nom: _____

Date: _____

Quel est le nombre indiqué dans chaque bloc de base dix?

1.



7

milliers

14

centaines

16

dizaines

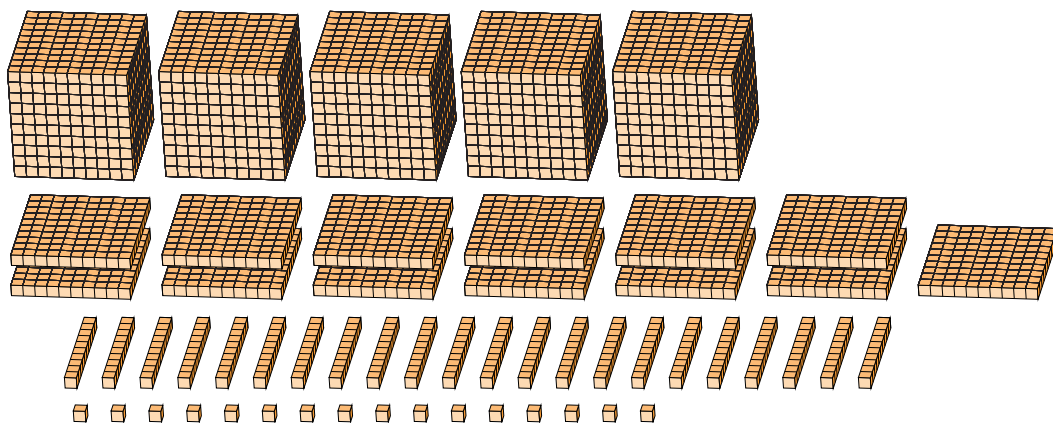
15

unités



8 5 7 5

2.



5

milliers

13

centaines

22

dizaines

16

unités



6 5 3 6

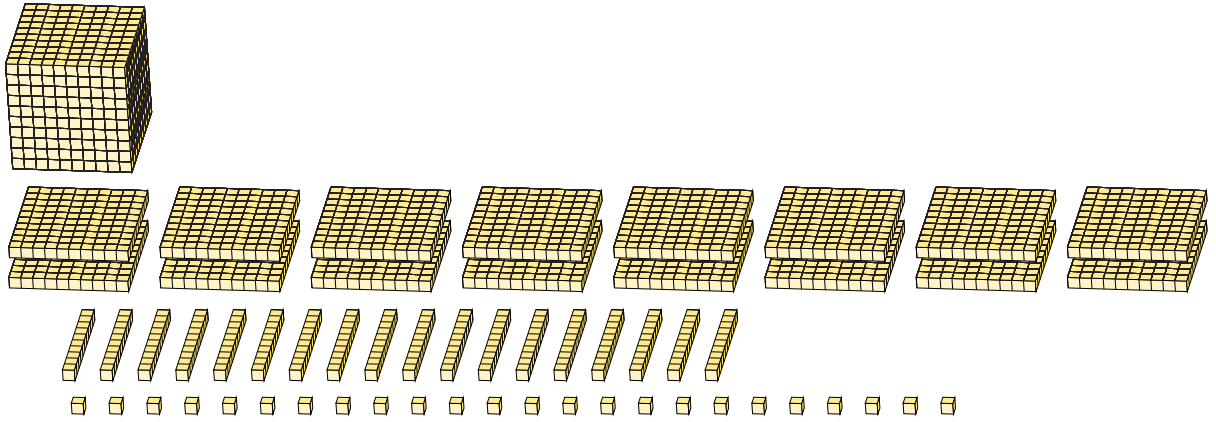
Regroupement en Blocs de Base Dix (J)

Nom: _____

Date: _____

Quel est le nombre indiqué dans chaque bloc de base dix?

1.

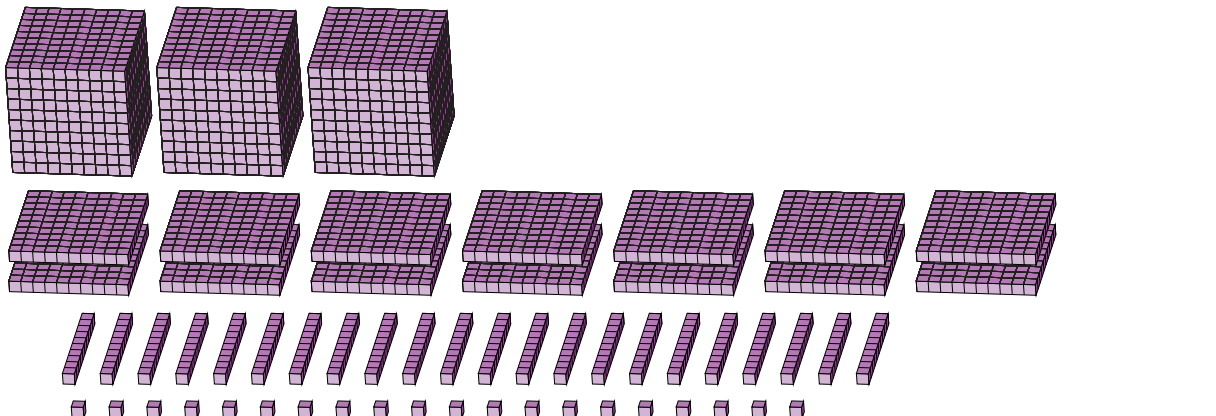


A large cube representing 1000 units is shown at the top left. Below it, the same 1000 units are decomposed into 10 flats (each 100 units), 100 rods (each 10 units), and 1000 individual units.

 \longrightarrow

milliers centaines dizaines unités regrouper

2.



Three large cubes representing 3000 units are shown at the top left. Below them, the 3000 units are decomposed into 30 flats (each 100 units), 300 rods (each 10 units), and 3000 individual units.

 \longrightarrow

milliers centaines dizaines unités regrouper

Regroupement en Blocs de Base Dix (J) Réponses

Nom: _____

Date: _____

Quel est le nombre indiqué dans chaque bloc de base dix?

1.

1

1	16	18	24
milliers	centaines	dizaines	unités

regrouper

2	8	0	4
---	---	---	---

2.

3

3	14	22	20
milliers	centaines	dizaines	unités

regrouper

4	6	4	0
---	---	---	---