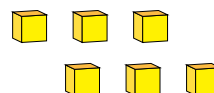
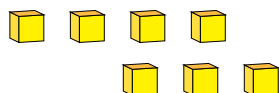
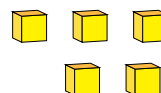
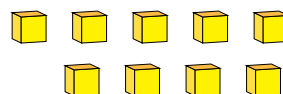
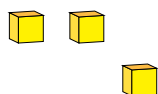


Représentation de Nombres (A)

Quel chiffre est représenté par chaque groupe de blocs d'unité?



1

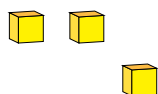


Représentation de Nombres (A) Réponses

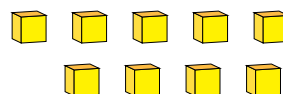
Quel chiffre est représenté par chaque groupe de blocs d'unité?



1



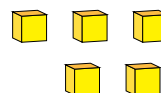
3



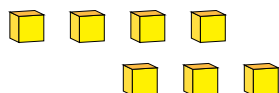
9



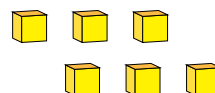
2



5



7



6