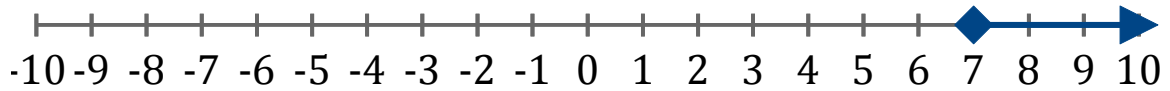


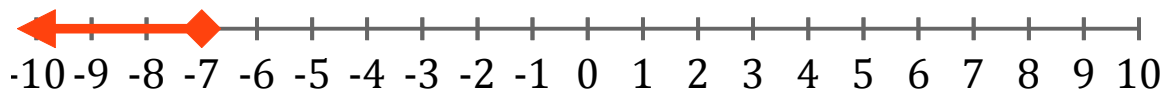
Systeme d'Inéquations (F)

Trouvez les solutions des systèmes d'inéquations suivantes.

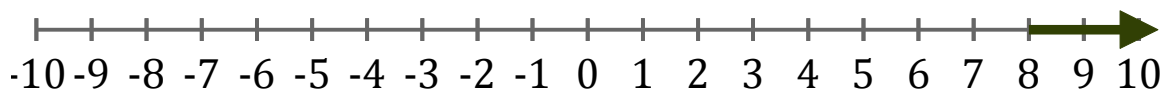
1. _____



2. _____



3. _____



4. _____



5. _____

