

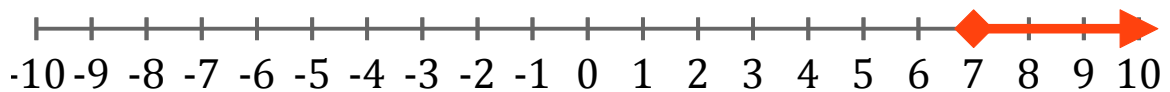
Systeme d'Inequations (A)

Trouvez les solutions des systemes d'inequations suivantes.

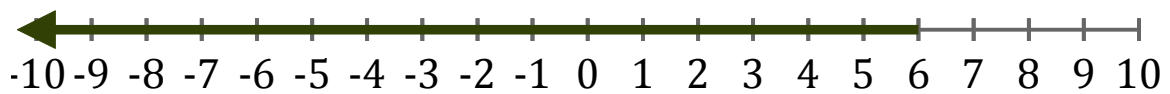
1. _____



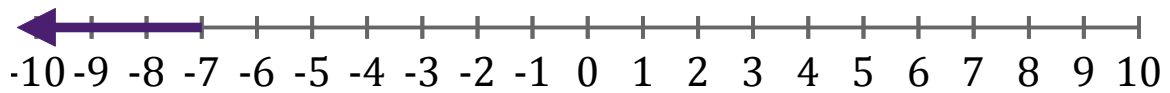
2. _____



3. _____



4. _____



5. _____



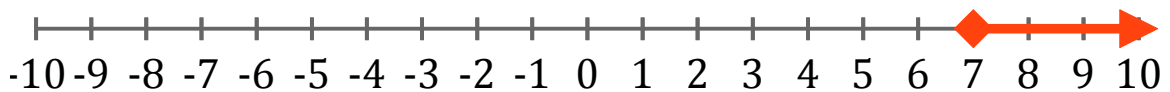
Systeme d'Inéquations (A) Réponses

Trouvez les solutions des systèmes d'inéquations suivantes.

1. $x < 2$



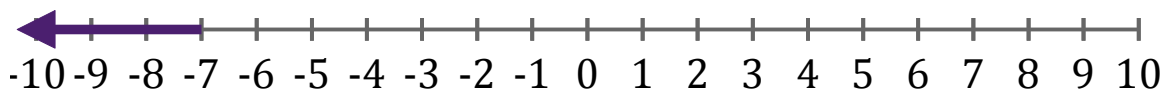
2. $x \geq 7$



3. $x < 6$



4. $x < -7$



5. $x < 8$

