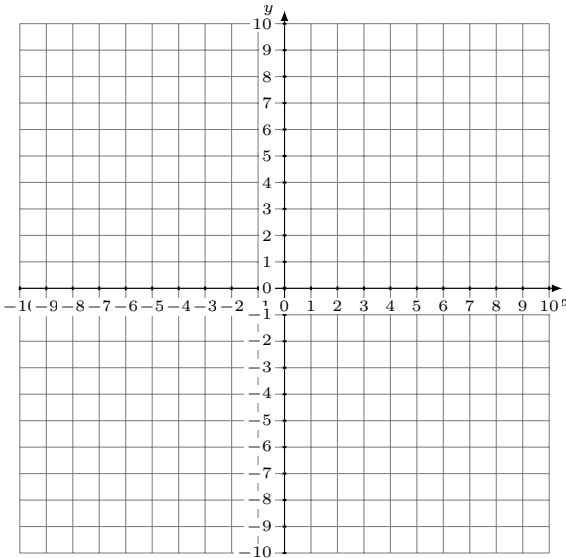


Représentation Graphique d'un Système d'Équations (E)

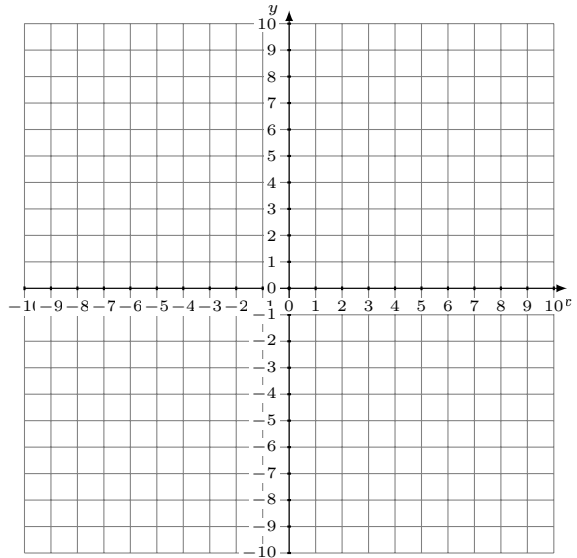
Représentez à l'aide d'un graphique chaque système et identifiez sa solution.

1. $x - y = -2$
 $x - 5y = 10$



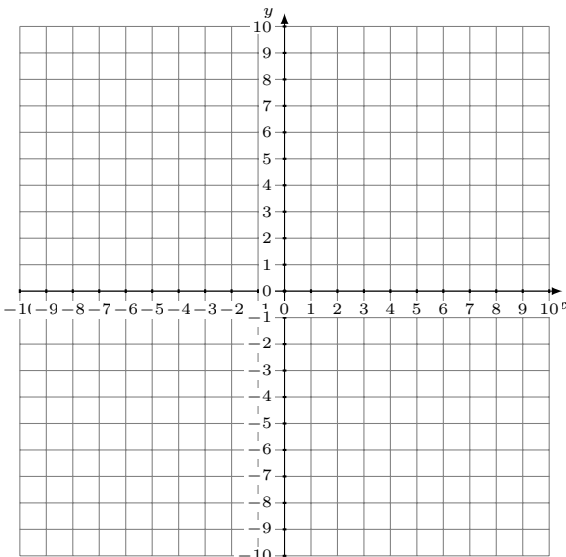
Solution: (____,____)

2. $y = -\frac{1}{9}x - 1$
 $y = -\frac{10}{9}x + 8$



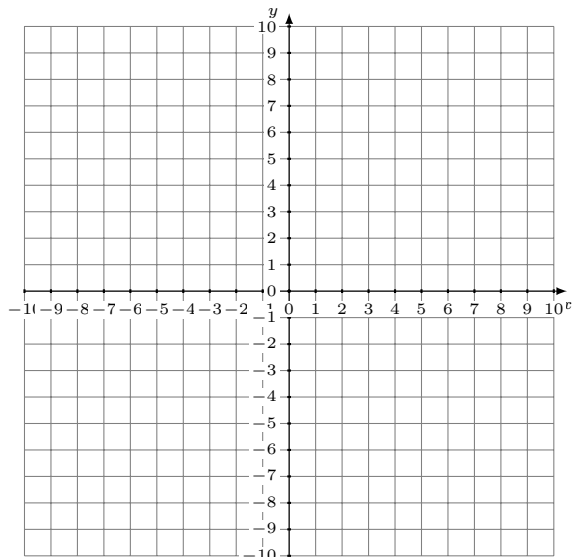
Solution: (____,____)

3. $y = -5x + 7$
 $11x + 3y = 9$



Solution: (____,____)

4. $x + y = -6$
 $y = x - 4$



Solution: (____,____)