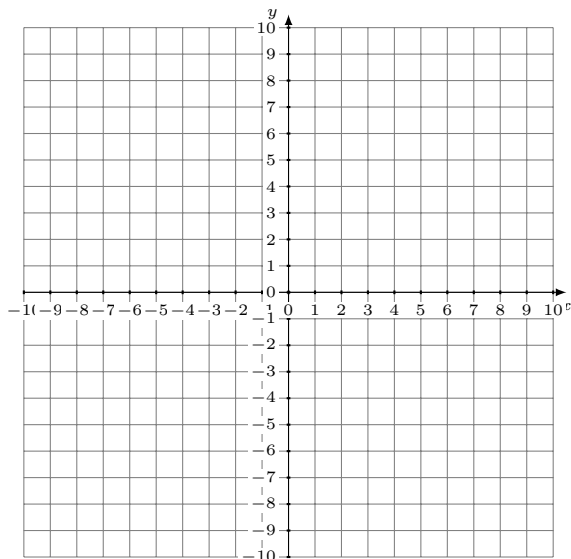


# Représentation Graphique d'un Système d'Équations (A)

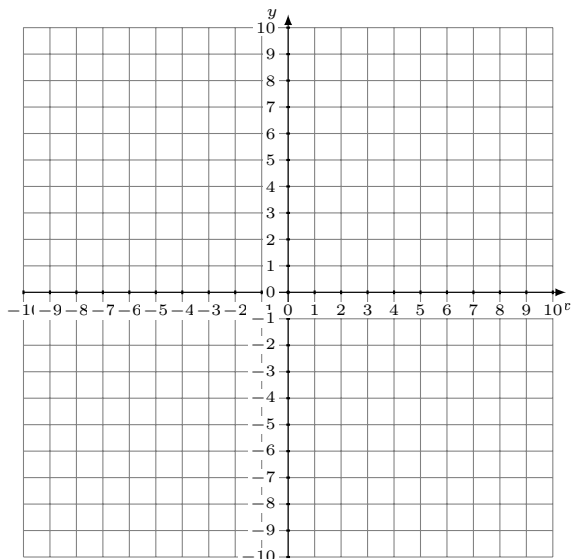
Représentez à l'aide d'un graphique chaque système et identifiez sa solution.

1.  $y = 3x + 7$   
 $y = \frac{13}{4}x + 8$



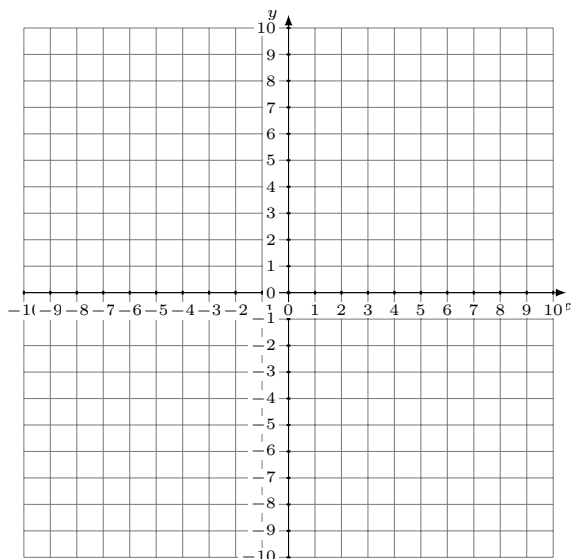
Solution: (\_\_\_\_,\_\_\_\_)

2.  $y = -\frac{7}{2}x - 6$   
 $2x + y = 0$



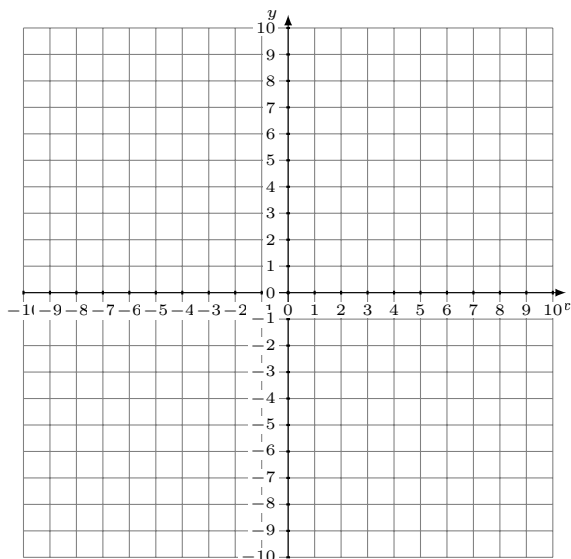
Solution: (\_\_\_\_,\_\_\_\_)

3.  $y = -\frac{3}{2}x - 8$   
 $y = -\frac{1}{4}x - 3$



Solution: (\_\_\_\_,\_\_\_\_)

4.  $y = \frac{1}{4}x + 7$   
 $y = 5$



Solution: (\_\_\_\_,\_\_\_\_)