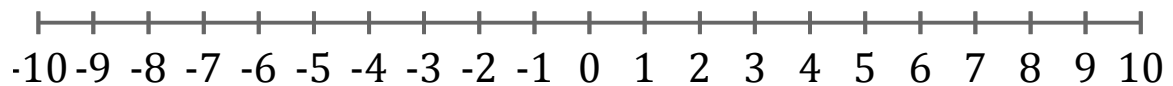


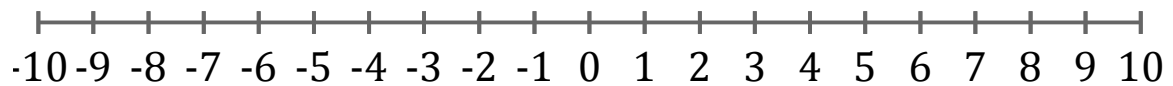
## Représentation Graphique d'une Inéquation (B)

Représentez sur une droite graduée la solution de l'inéquation suivante.

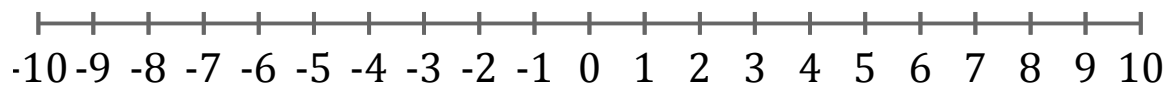
1.  $x \geq -4$



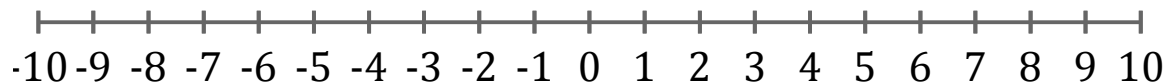
2.  $x < 8$



3.  $x > -8$



4.  $x \leq -7$



5.  $x < 2$

