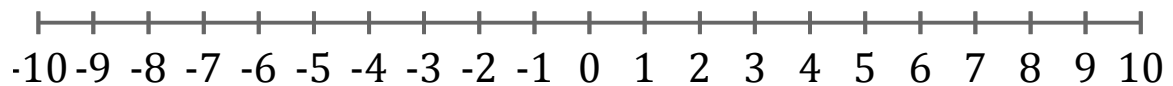


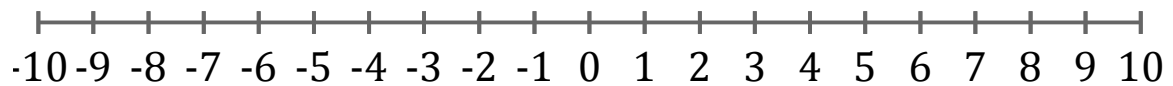
Représentation Graphique d'une Inéquation (B)

Représentez sur une droite graduée la solution de l'inéquation suivante.

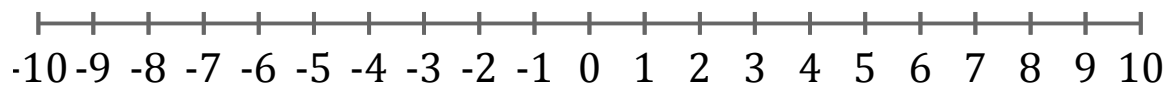
1. $x \geq -4$



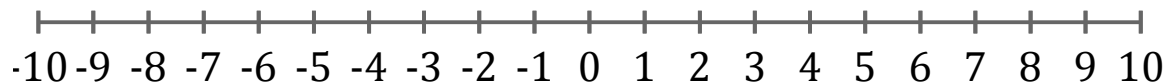
2. $x < 8$



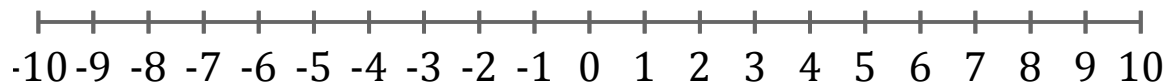
3. $x > -8$



4. $x \leq -7$



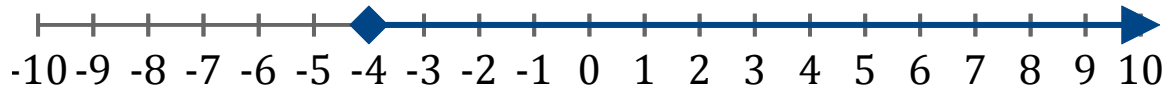
5. $x < 2$



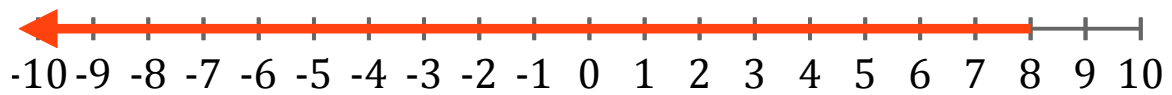
Représentation Graphique d'une Inéquation (B) Réponses

Représentez sur une droite graduée la solution de l'inéquation suivante.

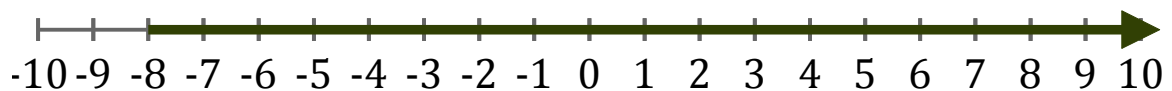
1. $x \geq -4$



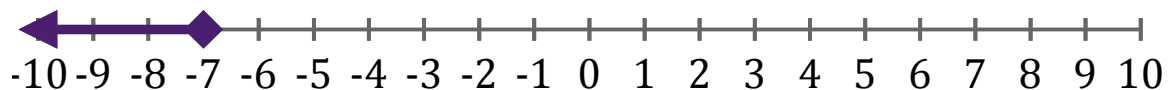
2. $x < 8$



3. $x > -8$



4. $x \leq -7$



5. $x < 2$

