
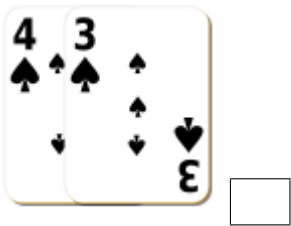
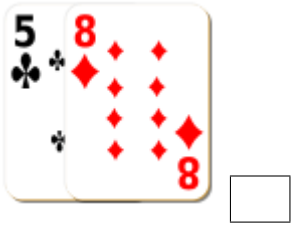





# Addition de Cartes de Jeux (H)

Calculez la somme de chaque ensemble de cartes.



# Addition de Cartes de Jeux (H) Solutions

Calculez la somme de chaque ensemble de cartes.



5



21



10



17



18



15



13



8



7



23



14



21