
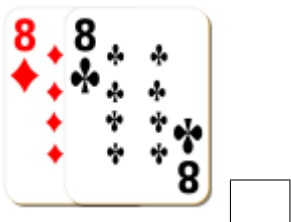

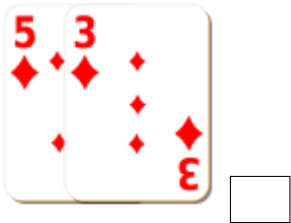
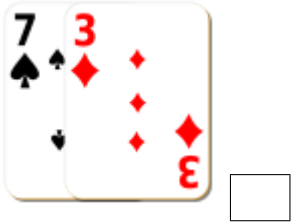


# Addition de Cartes de Jeux (D)

Calculez la somme de chaque ensemble de cartes.



# Addition de Cartes de Jeux (D) Solutions

Calculez la somme de chaque ensemble de cartes.



10



12



8



17



14



13



16



21



20



15



10



7